

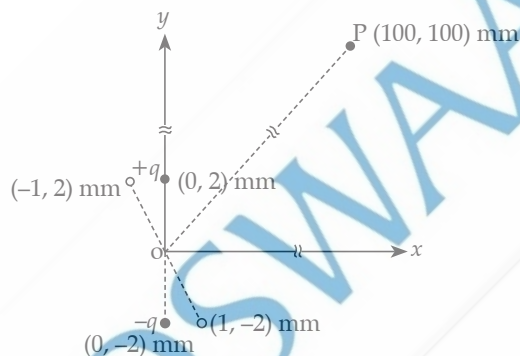
Physics

General Instructions:

SECTION 1 (Maximum Marks: 12)

- This section contains **FOUR (04)** questions.
- Each question has **FOUR** options (A), (B), (C) and (D). **ONLY ONE** of these four options is the correct answer.
- For each question, choose the option corresponding to the correct answer.
- Answer to each question will be evaluated according to the following marking scheme:
Full Marks : +3 If **ONLY** the correct option is chosen;
Zero Marks : 0 If none of the options is chosen (i.e. the question is unanswered);
Negative Marks : -1 In all other cases.

- Q. 1.** An electric dipole is formed by two charges $+q$ and $-q$ located in xy -plane at $(0, 2)$ mm and $(0, -2)$ mm, respectively, as shown in the figure. The electric potential at point P $(100, 100)$ mm due to the dipole is V_0 . The charges $+q$ and $-q$ are then moved to the points $(-1, 2)$ mm and $(1, -2)$ mm, respectively. What is the value of electric potential at P due to the new dipole?



- (A) $V_0/4$ (B) $V_0/2$
 (C) $V_0/\sqrt{2}$ (D) $3V_0/4$
- Q. 2.** Young's modulus of elasticity Y is expressed in terms of three derived quantities, namely, the gravitational constant G , Planck's constant h and

the speed of light c , as $Y = c^\alpha h^\beta G^\gamma$. Which of the following is the correct option?

- (A) $\alpha = 7, \beta = -1, \gamma = -2$
 (B) $\alpha = -7, \beta = -1, \gamma = -2$
 (C) $\alpha = 7, \beta = -1, \gamma = 2$
 (D) $\alpha = -7, \beta = 1, \gamma = -2$

- Q. 3.** A particle of mass m is moving in the xy -plane such that its velocity at a point (x, y) is given as $\vec{v} = \alpha(y\hat{x} + 2x\hat{y})$, where α is a non-zero constant. What is the force \vec{F} acting on the particle?

- (A) $\vec{F} = 2m\alpha^2(x\hat{x} + y\hat{y})$
 (B) $\vec{F} = m\alpha^2(y\hat{x} + 2x\hat{y})$
 (C) $\vec{F} = 2m\alpha^2(y\hat{x} + x\hat{y})$
 (D) $\vec{F} = m\alpha^2(x\hat{x} + 2y\hat{y})$

- Q. 4.** An ideal gas is in thermodynamic equilibrium. The number of degrees of freedom of a molecule of the gas is n . The internal energy of one mole of the gas is U_n and the speed of sound in the gas is v_n . At a fixed temperature and pressure, which of the following is the correct option?

- (A) $v_3 < v_6$ and $U_3 > U_6$
 (B) $v_5 > v_3$ and $U_3 > U_5$
 (C) $v_5 > v_7$ and $U_5 < U_7$
 (D) $v_6 < v_7$ and $U_6 < U_7$

General Instructions:

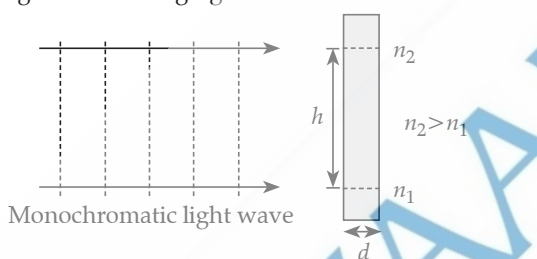
SECTION 2 (Maximum Marks: 12)

- This section contains **THREE (03)** questions.
- Each question has **FOUR** options (A), (B), (C) and (D). **ONE OR MORE THAN ONE** of these four option(s) is (are) correct answer(s).
- For each question, choose the option(s) corresponding to (all) the correct answer(s).
- Answer to each question will be evaluated according to the following marking scheme:
Full Marks : +4 **ONLY** if (all) the correct option(s) is(are) chosen;
Partial Marks : +3 If all the four options are correct but **ONLY** three options are chosen;
Partial Marks : +2 If three or more options are correct but **ONLY** two options are chosen, both of which are correct;

Partial Marks : +1 If two or more options are correct but ONLY one option is chosen and it is a correct option;
Zero Marks : 0 If unanswered;
Negative Marks : -2 In all other cases.

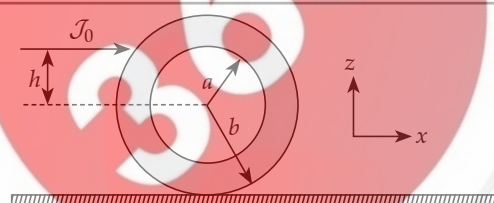
- For example, in a question, if (A), (B) and (D) are the ONLY three options corresponding to correct answers, then choosing ONLY (A), (B) and (D) will get +4 marks;
 choosing ONLY (A) and (B) will get +2 marks;
 choosing ONLY (A) and (D) will get +2 marks;
 choosing ONLY (B) and (D) will get +2 marks;
 choosing ONLY (A) will get +1 mark;
 choosing ONLY (B) will get +1 mark;
 choosing ONLY (D) will get +1 mark;
 choosing no option(s) (i.e. the question is unanswered) will get 0 marks and
 choosing any other option(s) will get -2 marks

Q. 5. A monochromatic light wave is incident normally on a glass slab of thickness d , as shown in the figure. The refractive index of the slab increases linearly from n_1 to n_2 over the height h . Which of the following statement(s) is(are) true about the light wave emerging out of the slab?



- (A) It will deflect up by an angle $\tan^{-1} \left[\frac{(n_2^2 - n_1^2)d}{2h} \right]$.
- (B) It will deflect up by an angle $\tan^{-1} \left[\frac{(n_2 - n_1)d}{h} \right]$.
- (C) It will not deflect.
- (D) The deflection angle depends only on $(n_2 - n_1)$ and not on the individual values of n_1 and n_2 .

Q. 6. An annular disk of mass M , inner radius a and outer radius b is placed on a horizontal surface with coefficient of friction μ , as shown in the figure. At some time, an impulse $\mathcal{J}_0 \hat{x}$ is applied at a height h above the center of the disk. If $h = h_m$ then the disk rolls without slipping along the x -axis. Which of the following statement(s) is(are) correct?



- (A) For $\mu \neq 0$ and $a \rightarrow 0$, $h_m = b/2$.
- (B) For $\mu \neq 0$ and $a \rightarrow b$, $h_m = b$.
- (C) For $h = h_m$, the initial angular velocity does not depend on the inner radius a .
- (D) For $\mu = 0$ and $h = 0$, the wheel always slides without rolling.

Q. 7. The electric field associated with an electromagnetic wave propagating in a dielectric medium is given by $\vec{E} = 30(2\hat{x} + \hat{y})\sin \left[2\pi \left(5 \times 10^{14}t - \frac{10^7}{3}z \right) \right]$ V m⁻¹. Which of the following option(s) is(are) correct?

[Given: The speed of light in vacuum, $c = 3 \times 10^8$ m s⁻¹]

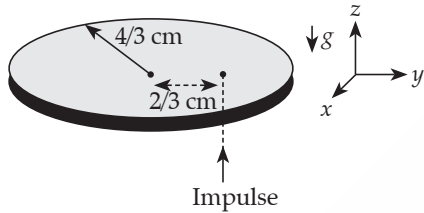
- (A) $B_x = -2 \times 10^{-7} \sin \left[2\pi \left(5 \times 10^{14}t - \frac{10^7}{3}z \right) \right]$ Wb m⁻².
- (B) $B_y = 2 \times 10^{-7} \left[2\pi \left(5 \times 10^{14}t - \frac{10^7}{3}z \right) \right]$ Wb m⁻².
- (C) The wave is polarized in the xy -plane with polarization angle 30° with respect to the x -axis.
- (D) The refractive index of the medium is 2.

General Instructions:

SECTION 3 (Maximum Marks: 24)

- This section contains SIX (06) questions.
- The answer to each question is a NON-NEGATIVE INTEGER.
- For each question, enter the correct integer corresponding to the answer using the mouse and the on-screen virtual numeric keypad in the place designated to enter the answer.
- Answer to each question will be evaluated according to the following marking scheme:
Full Marks : +4 If ONLY the correct integer is entered;
Zero Marks : 0 In all other cases.

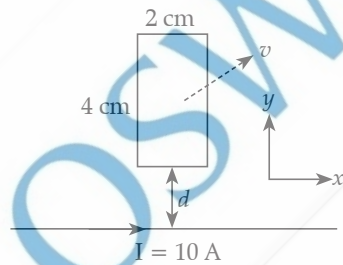
- Q. 8.** A thin circular coin of mass 5 gm and radius $4/3$ cm is initially in a horizontal xy -plane. The coin is tossed vertically up ($+z$ direction) by applying an impulse of $\sqrt{\frac{\pi}{2}} \times 10^{-2}$ N s at a distance $2/3$ cm from its center. The coin spins about its diameter and moves along the $+z$ direction. By the time the coin reaches back to its initial position, it completes n rotations. The value of n is _____ .
 [Given: The acceleration due to gravity $g = 10 \text{ m s}^{-2}$]



- Q. 9.** A rectangular conducting loop of length 4 cm and width 2 cm is in the xy -plane, as shown in the figure. It is being moved away from a thin and long conducting wire along the direction $\frac{\sqrt{3}}{2}\hat{x} + \frac{1}{2}\hat{y}$ with a constant speed v . The wire is carrying a steady current $I = 10$ A in the positive x -direction. A current of $10 \mu\text{A}$ flows through the loop when it is at a distance $d = 4$ cm from the wire. If the resistance of the loop is 0.1Ω , then the value of v is _____ m s^{-1} .

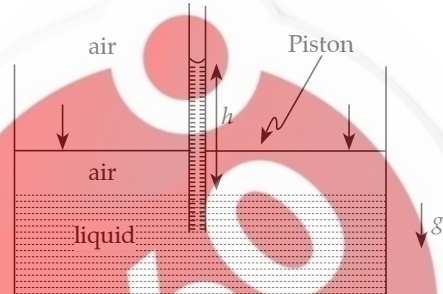
[Given: The permeability of free space

$$\mu_0 = 4\pi \times 10^{-7} \text{ N A}^{-2}]$$

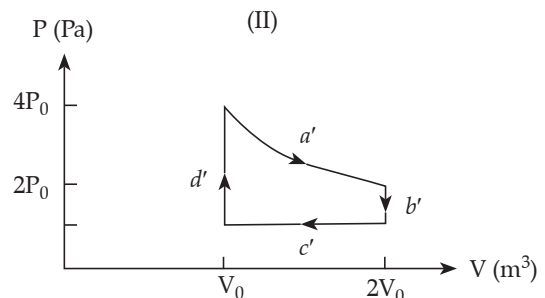
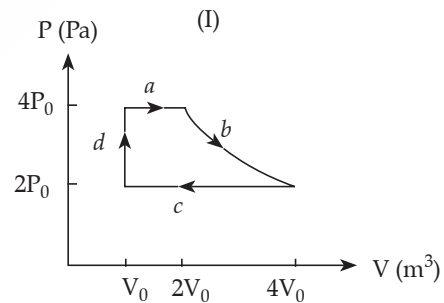


- Q. 10.** A string of length 1 m and mass 2×10^{-5} kg is under tension T . When the string vibrates, two successive harmonics are found to occur at frequencies 750 Hz and 1000 Hz. The value of tension T is _____ Newton.
- Q. 11.** An incompressible liquid is kept in a container having a weightless piston with a hole. A capillary tube of inner radius 0.1 mm is dipped vertically into the liquid through the airtight piston hole, as shown in the figure. The air in the container is isothermally compressed from its original volume V_0 to $\frac{100}{101}V_0$ with the movable piston. Considering air as an ideal gas, the height (h) of the liquid column in the capillary above the liquid level in cm is _____ .

[Given: Surface tension of the liquid is 0.075 N m^{-1} , atmospheric pressure is 10^5 N m^{-2} , acceleration due to gravity (g) is 10 m s^{-2} , density of the liquid is 10^3 kg m^{-3} and contact angle of capillary surface with the liquid is zero]



- Q. 12.** In a radioactive decay process, the activity is defined as $A = -\frac{dN}{dt}$, where $N(t)$ is the number of radioactive nuclei at time t . Two radioactive sources, S_1 and S_2 have same activity at time $t = 0$. At a later time, the activities of S_1 and S_2 are A_1 and A_2 , respectively. When S_1 and S_2 have just completed their 3rd and 7th half-lives, respectively, the ratio A_1/A_2 is _____ .
- Q. 13.** One mole of an ideal gas undergoes two different cyclic processes I and II, as shown in the P-V diagrams below. In cycle I, processes a, b, c and d are isobaric, isothermal, isobaric and isochoric, respectively. In cycle II, processes a', b', c' and d' are isothermal, isochoric, isobaric and isochoric, respectively. The total work done during cycle I is W_I and that during cycle II is W_{II} . The ratio W_I/W_{II} is _____ .



General Instructions:

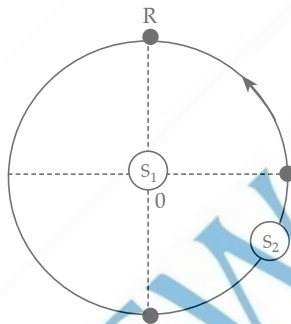
SECTION 4 (Maximum Marks: 12)

- This section contains **TWO (02)** paragraphs.
- Based on each paragraph, there are **TWO (02)** questions.
- The answer to each question is a **NUMERICAL VALUE**.
- For each question, enter the correct numerical value of the answer using the mouse and the onscreen virtual numeric keypad in the place designated to enter the answer.
- If the numerical value has more than two decimal places, **truncate/round-off** the value to **TWO** decimal places.
- Answer to each question will be evaluated **according to the following marking scheme:**
Full Marks : +3 If **ONLY** the correct numerical value is entered in the designated place;
Zero Marks : 0 In all other cases.

PARAGRAPH I

S_1 and S_2 are two identical sound sources of frequency 656 Hz. The source S_1 is located at O and S_2 moves anti-clockwise with a uniform speed $4\sqrt{2} \text{ m s}^{-1}$ on a circular path around O, as shown in the figure. There are three points P, Q and R on this path such that P and R are diametrically opposite while Q is equidistant from them. A sound detector is placed at point P. The source S_1 can move along direction OP.

[Given: The speed of sound in air is 324 m s^{-1}]



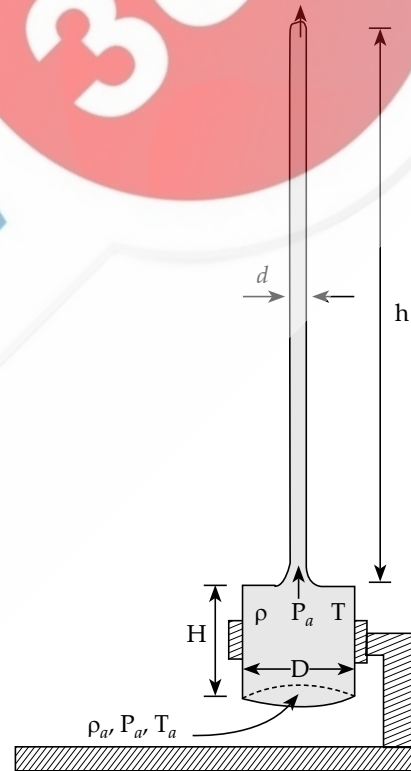
- Q. 14. When only S_2 is emitting sound and it is at Q, the frequency of sound measured by the detector in Hz is _____.
- Q. 15. Consider both sources emitting sound. When S_2 is at R and S_1 approaches the detector with a speed 4 m s^{-1} , the beat frequency measured by the detector is _____ Hz.

PARAGRAPH II

A cylindrical furnace has height (h) and diameter (d) both 1 m. It is maintained at temperature 360 K. The air gets heated inside the furnace at constant pressure P_a and its temperature becomes $T = 360 \text{ K}$. The hot air with density ρ rises up a vertical chimney of diameter $d = 0.1 \text{ m}$ and height $h = 9 \text{ m}$ above the furnace and exits the chimney (see the figure). As a result, atmospheric air of density ρ_a , pressure P_a and temperature $T_a = 300 \text{ K}$ enters the furnace. Assume air as an ideal gas, neglect the

variations in ρ and T inside the chimney and the furnace. Also ignore the viscous effects.

[Given: The acceleration due to gravity $g = 10 \text{ m s}^{-2}$ and $\pi = 3.14$]



- Q. 16. Considering the air flow to be streamline, the steady mass flow rate of air exiting the chimney is _____ g s^{-1} .
- Q. 17. When the chimney is closed using a cap at the top, a pressure difference ΔP develops between the top and the bottom surfaces of the cap. If the changes in the temperature and density of the hot air, due to the stoppage of air flow, are negligible then the value of ΔP is _____ N m^{-2} .

ANSWER KEY

Q.No.	Answer key	Topic's name	Chapter's name
Section -I			
1	(B)	Electric Potential due to a dipole	Electrostatic Potential & Capacitance
2	(A)	Dimensional Analysis	Units & Measurement
3	(A)	General Kinematics	Motion in a plane
4	(C)	Degree of freedom, Internal Energy	Kinetic theory of gasses
Section -II			
5	(B and D)	Optical & geometrical path, Wave front	Wave Optics
6	(A, B, C and D)	Impulse, Rolling motion	System of particles & Rotational motion
7	(A and D)	EM waves—Mathematical representation	Electromagnetic waves
Section -III			
8	30	Impulse	System of particles & Rotational Motion
9	4	Motion in Electromagnetic Field	Electromagnetic Induction
10	5	Standing Waves	Waves
11	25	Capillary tube, Thermodynamic processes	Mechanical properties of fluids
12	16	Radioactive decay	Nuclei
13	2	Workdone in cyclic process	Thermodynamics
Section -IV			
14	648	Doppler's Effect	Waves
15	8.2	Doppler's Effect	Waves
16	60.81	Kinetic theory of gasses, Continuity equation	Mechanical properties of fluids
17	30	Kinetic theory of gasses, Continuity equation	Mechanical properties of fluids

Physics

1. Correct option is (B).

When the dipole is at (0, 2) mm and (0, -2) mm,

$$\vec{P}_1 = q \times 4 \times 10^{-3} \hat{j}$$

$V_{\text{at (100, 100) mm,}}$

$$V_0 = \frac{k\vec{P}_1 \cdot \vec{r}_1}{|\vec{r}_1|^3}$$

$$\Rightarrow V_0 = \frac{kq \times [4 \times 10^{-3} \hat{j}] \cdot [0.1\hat{i} + 0.1\hat{j}]}{[\sqrt{(0.1)^2 + (0.1)^2}]^3}$$

$$\Rightarrow V_0 = \frac{kq[0.4 \times 10^{-3}]}{[\sqrt{(0.1)^2 + (0.1)^2}]^3}$$

Now +q and -q are moved to (-1, 2) mm and (1, -2) mm

$$\text{So } \vec{P} = q(-2\hat{i} + 4\hat{j}) \times 10^{-3}$$

$$\vec{r}_1 = 0.1\hat{i} + 0.1\hat{j}$$

$$\text{So } V_0 = \frac{k\vec{P} \cdot \vec{r}_1}{|\vec{r}_1|^3} = \frac{k \times q[-2\hat{i} + 4\hat{j}] \times 10^{-3} \cdot [0.1\hat{i} + 0.1\hat{j}]}{[\sqrt{(0.1)^2 + (0.1)^2}]^3}$$

$$\Rightarrow V = \frac{kq(-0.2 + 0.4) \times 10^{-3}}{[\sqrt{(0.1)^2 + (0.1)^2}]^3} = \frac{kq(0.2) \times 10^{-3}}{[\sqrt{(0.1)^2 + (0.1)^2}]^3}$$

$$\Rightarrow V = \frac{V_0}{2}$$

2. Correct option is (A).

$$Y = C^\alpha h^\beta G^\gamma$$

$$\Rightarrow [M^1 L^{-1} T^{-2}] = [L T^{-1}]^\alpha [M^1 L^2 T^{-1}]^\beta [M^{-1} L^3 T^{-2}]^\gamma$$

$$\Rightarrow [M^1 L^{-1} T^{-2}] = M^{\beta-\gamma} L^{\alpha+2\beta+3\gamma} T^{-\alpha-\beta-2\gamma}$$

Comparing both the sides

$$\beta - \gamma = 1 \quad \dots(i)$$

$$\alpha + 2\beta + 3\gamma = -1 \quad \dots(ii)$$

$$-\alpha - \beta - 2\gamma = -2 \quad \dots(iii)$$

Adding eqns (ii) and (iii),

$$\beta + \gamma = -3 \quad \dots(iv)$$

Again adding eqn (i) and (iv),

$$\boxed{\beta = -1}$$

Putting the value of β in eqn (i),

$$\boxed{\gamma = -2}$$

Putting all these values in eqn (iii),

$$\boxed{\alpha = 7}$$

3. Correct option is (A).

$$\vec{v} = \alpha(y\hat{x} + 2x\hat{y})$$

$$\Rightarrow v_x = \frac{dx}{dt} = \alpha y \quad \text{and} \quad v_y = \frac{dy}{dt} = 2\alpha x$$

Now $\vec{a} = \frac{d\vec{v}}{dt} = \alpha \frac{dy}{dt} \hat{x} + 2\alpha \frac{dx}{dt} \hat{y}$

$$\vec{a} = \alpha(2\alpha x)\hat{x} + 2\alpha(\alpha y)\hat{y}$$

$$\Rightarrow \vec{a} = (2\alpha^2 x)\hat{x} + (2\alpha^2 y)\hat{y}$$

$$\Rightarrow \vec{a} = 2\alpha^2(x\hat{x} + y\hat{y})$$

$$\text{So } \vec{F} = m\vec{a} = 2m\alpha^2(x\hat{x} + y\hat{y})$$

4. Correct option is (C).

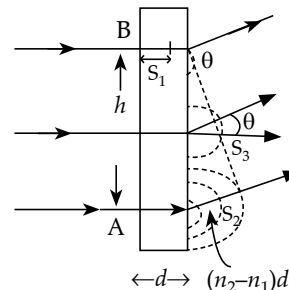
$$v = \sqrt{\frac{\gamma RT}{M}}$$

where $\gamma = 1 + \frac{2}{n}$

and $u = \frac{nRT}{2}$

If n is more, γ will be less, so velocity of sound will also be less, but the internal energy (U_n) will be more.

5. Correct option is (B and D).



At A, let the wave front reaches at the end of the slab in time t .

$$\text{So } t = \frac{\text{distance}}{\text{speed}} = \frac{d}{\frac{c}{n_1}} = \frac{n_1 d}{c}$$

In time t , the wave front at B, let travels s_1 .

$$s_1 = \frac{c}{n_2} \times \frac{n_1 d}{c} = \frac{dn_1}{n_2}$$

When wave front of B, reaches at end of the slab, further t_1 time takes place.

$$\text{So } t_1 = \left(\frac{d - s_1}{c} \right) n_2 = \left(d - \frac{dn_1}{n_2} \right) \frac{n_2}{c} = \frac{d(n_2 - n_1)}{c}$$

In time t_1 , wave front at A will travel s_2 ,

$$s_2 = ct_1 = d(n_2 - n_1)$$

$$\text{and } \tan \theta = \frac{(n_2 - n_1)d}{h}$$

6. Correct options are [A, B, C and D].

Angular impulse about center of mass = ΔL

$$J_0 h = I_{cm} \omega$$

$$\Rightarrow \omega = \frac{J_0 h}{I_{cm}}$$

Linear impulse = ΔP

$$J_0 = \Delta P$$

$$\Rightarrow J_0 = MV$$

$$\Rightarrow V = \frac{J_0}{M}$$

As the disc is pure rolling,

$$v = \omega b$$

$$\Rightarrow \omega = \frac{v}{b}$$

$$\Rightarrow \omega = \frac{J_0}{Mb}$$

So ω is independent of radius (a)

Therefore, the option (C) is the answer.

If $a \rightarrow b$, then the disc is a ring of radius b .

$$\text{So } I_{cm} = Mb^2$$

$$\Rightarrow \omega = \frac{J_0 h}{Mb^2}$$

$$\Rightarrow \frac{J_0}{Mb} = \frac{J_0 h}{Mb^2}$$

$$\Rightarrow h = b \quad \therefore h_m = b$$

Therefore, the option (B) is the answer.

$$\text{If } h = 0, \omega = \frac{J_0 h}{Mb^2} = 0$$

but $v = \frac{J_0}{M}$, wheel always slide without rolling

Therefore, the option (D) is the answer.

If $a \rightarrow 0$, then disc is a solid disc of radius b .

$$\therefore I_{cm} = \frac{Mb^2}{2}$$

$$\Rightarrow \omega = \frac{J_0 h \times 2}{Mb^2}$$

$$\Rightarrow \frac{J_0}{Mb} = \frac{J_0 h \times 2}{Mb^2}; h = \frac{b}{2}$$

$$\text{So } h_m = \frac{b}{2}$$

Therefore, the option (A) is the answer.

7. Correct options are [A and D].

Speed of light in the medium

$$v = \frac{5 \times 10^{14}}{\frac{10^7}{3}} = \frac{5 \times 10^{14} \times 3}{10^7} = 1.5 \times 10^8$$

$$\Rightarrow v = \frac{c}{2}$$

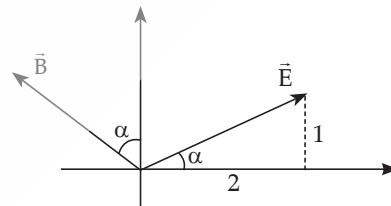
$n = 2$ (refractive index of the medium)

Therefore, the option (D) is the answer.

Now magnitude of

$$B = \frac{E}{v}$$

$$\Rightarrow B = \frac{30\sqrt{5}}{1.5 \times 10^8}$$



$$\tan \alpha = \frac{1}{2}$$

$$\sin \alpha = \frac{1}{\sqrt{5}}$$

The direction of \vec{B} is along the direction of $\vec{v} \times \vec{E}$

$$\text{i.e. } \hat{v} \times \hat{E} = \hat{B}$$

Now $B_x = -B \sin \alpha$

$$\Rightarrow B_x = -\frac{30\sqrt{5}}{1.5 \times 10^8} \times \frac{1}{\sqrt{5}} = -2 \times 10^7$$

Therefore, option (A) is the answer.

8. Correct answer is [30].

$$\text{Impulse} = \Delta P = MV$$

$$\Rightarrow \sqrt{\frac{\pi}{2}} \times 10^{-2} = \frac{5}{1000} \times V$$

$$\Rightarrow V = \sqrt{2\pi} \text{ m/s (velocity of CoM)}$$

Now time of flight

$$t = \frac{2\sqrt{2\pi}}{10} = \frac{\sqrt{2\pi}}{5}$$

Angular impulse = impulse $\times \perp r$ distance

$$= I_{\text{diameter}} \times \omega$$

$$= \frac{mr^2}{4} \times \omega$$

$$\Rightarrow \sqrt{\frac{\pi}{2}} \times 10^{-2} \times \frac{2}{3} \times 10^{-2}$$

$$= \frac{5 \times 10^{-3} \times \frac{16}{9} \times 10^{-4} \times \omega}{4}$$

$$\Rightarrow \omega = \sqrt{\frac{\pi}{2}} \times 300$$

Now $\theta = \omega t + \frac{1}{2} \alpha t^2$

$$\Rightarrow \theta = \omega t = \sqrt{\frac{\pi}{2}} \times 300 \times \frac{\sqrt{2\pi}}{5} = 60\pi$$

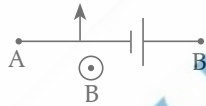
Hence number of revolutions,

$$\Rightarrow n = \frac{60\pi}{2\pi} = 30.$$

9. Correct answer is [4].

Induced emf in AB (e_1) = $(\vec{v} \times \vec{B}) \cdot \vec{l}$

$$V_y = V \times \frac{1}{2}$$

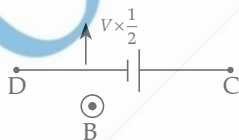


So $B = \frac{\mu_0 I}{2\pi r} = \frac{1}{2} \times 10^{-4} \text{ T}$

emf in AB = $e_1 = B \times \left(\frac{1}{2} \times V\right) \times (2 \times 10^{-2})$

$$= \frac{V}{2} \times 10^{-6} \text{ volt}$$

Induced emf in CD (e_2) = $(\vec{V} \times \vec{B}) \cdot \vec{l}$



emf in CD = e_2

$$= B \times \frac{1}{2} \times v \times 2 \times 10^{-2}$$

$$= \left(\frac{\mu_0 I}{2\pi(8 \times 10^{-2})}\right) \times \left(\frac{1}{2}\right) \times 2 \times 10^{-2} \times (V)$$

$$= V \times \frac{1}{4} \times 10^{-6}$$

The two sides perpendicular to the wire would contribute net zero emf.

So net emf in the loop = $e_1 - e_2$

$$= \left(\frac{V}{2} - \frac{V}{4}\right) \times 10^{-6} \text{ volt}$$

$$= \frac{V}{4} \times 10^{-6} \text{ volt}$$

Resistance of the loop = 0.1Ω

So current in the loop,

$$I = \frac{10^{-6}}{4 \times 0.1} \times v$$

$$\Rightarrow \frac{10v}{4} = 10$$

$$\Rightarrow v = 4 \text{ m s}^{-1}$$

10. Correct answer is [5].

$$\frac{nv}{2l} = 750$$

$$(n+1) \frac{v}{2l} = 1000$$

$$\Rightarrow \frac{v}{2l} = 1000 - 750 = 250$$

$$\Rightarrow v = 2 \times (1) \times 250 = 500 \text{ ms}^{-1}$$

and $\mu = \frac{m}{l} = 2 \times 10^{-5}$

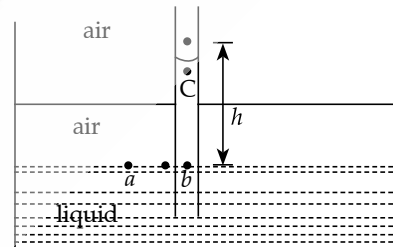
So $\sqrt{\frac{T}{\mu}} = 500$

$$\Rightarrow T = (500)^2 \times \mu$$

$$= 500 \times 500 \times 2 \times 10^{-5} = 5 \text{ N}$$

11. Correct answer is [25].

Let P_f be the air pressure.



$$P_0 V_0 = P_f V_f$$

$$\Rightarrow P_0 V_0 = P_f \left(\frac{100}{101}\right) V_0$$

$$\Rightarrow P_f = P_0 \times \frac{100}{101} \quad V_0 = 101 \times 10^3 \text{ Pa}$$

$$[\because P_0 = 10^5 \text{ N m}^{-2}]$$

Now consider 4 points as shown in the diagram

$$P_d - P_c = \frac{2T}{R}$$

$$\Rightarrow P_c = P_d - \frac{2T}{R}$$

$$\Rightarrow P_c = P_0 - \frac{2T}{R} \quad [\because P_d = P_0]$$

Now $P_a = P_b$ and also $P_a = P_f$

$$\Rightarrow P_f = fgh + P_c$$

$$\Rightarrow 101 \times 10^3 = (10^3 \times 10 \times h) + \left(10^5 - \frac{2 \times 0.075}{0.1 \times 10^{-3}}\right)$$

$$\Rightarrow \boxed{h = 25 \text{ cm}}$$

12. Correct answer is [16].

$$n^{\text{th}} \text{ half life} = \frac{A_0}{2^n}$$

So $\frac{A_1}{A_2} = \frac{2^3}{2^7} = 2^4 = 16$

13. Correct answer is [2].

$$W_I = W_a + W_b + W_c + W_d$$

$$= 4P_0(2V_0 - V_0) + 4P_0(2V_0) \ln \frac{4V_0}{2V_0} + 2P_0(V_0 - 4V_0) + 0$$

$$= 8P_0V_0 \ln 2 - 2P_0V_0$$

$$W_{II} = W_{a'} + W_{b'} + W_{c'} + W_{d'}$$

$$= 4P_0V_0 \ln \left(\frac{2V_0}{V_0}\right) + 0 P_0(V_0 - 2V_0) + 0$$

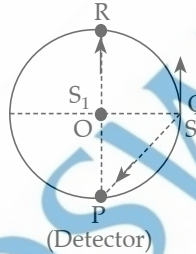
$$= 4P_0V_0 \ln 2 - P_0V_0$$

$$\frac{W_I}{W_{II}} = \frac{2}{1} = 2$$

14. Correct answer is [648].

$$f_0 = 656 \text{ Hz}$$

$$\text{Velocity of sound} = 324 \text{ m s}^{-1}$$



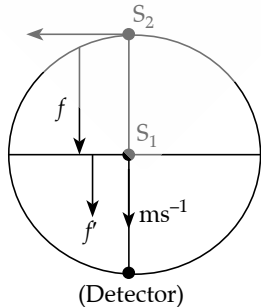
Velocity of the source away from detector,

$$v_s = 4\sqrt{2} \cos 45^\circ = 4 \text{ m s}^{-1}$$

$$\therefore f = \left(\frac{v}{v + v_s}\right) f_0$$

$$= \left(\frac{324}{324 + 4}\right) \times 656 = 648 \text{ Hz}$$

15. Correct answer is [8.2].



$$f' = \left(\frac{v}{v - v_s}\right) \times f_0$$

$$= \left(\frac{324}{324 - 4}\right) \times 656 = 664.2$$

$$f_{\text{beats}} = f' - f_0 = 664.2 - 656 = 8.2 \text{ Hz}$$

16. Correct answer is [60.81].

$$PM_0 = \rho RT$$

$$\Rightarrow \frac{PM_0}{R} = \rho T$$

Now $\rho_a T_a = \rho T$

$$\Rightarrow \rho = 1.2 \times \frac{300}{360}$$

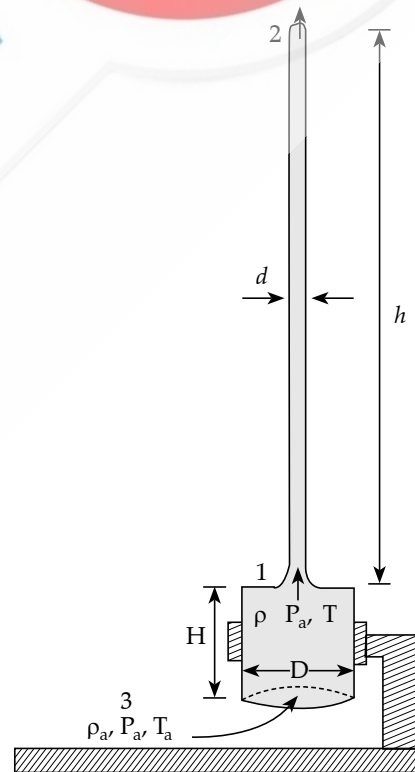
$$\Rightarrow \rho = 1 \text{ kg m}^{-3}$$

Applying Bernoulli equation between diagram points 1 & 2,

$$P_a + \frac{1}{2} \rho v_1^2 = P + \rho gh + \frac{1}{2} \rho v_2^2 \quad \dots(i)$$

Applying Bernoulli equation between diagram points 2 & 3,

$$P = P_a + \rho_a(H + h)g \quad \dots(ii)$$



$$P_a = P_a - \rho_a(H + h)g + \rho gh + \frac{1}{2} \rho v_2^2$$

$$\Rightarrow \frac{1}{2} \rho v_2^2 = \rho_a(H + h)g - \rho gh$$

$$\Rightarrow \frac{1}{2} \times 1 \times v_2^2 = 1.2 \times (10)(10) - 1 \times 10 \times 9$$

$$\Rightarrow \frac{v_2^2}{v} = 120 - 90 = 30$$

$$\Rightarrow v_2 = \sqrt{60} \text{ ms}^{-1}$$

$$\begin{aligned} \text{Now } \frac{dm}{dt} &= \rho A_2 v_2 = 1 \times 3.14 \times \left(\frac{0.1}{2}\right)^2 \times \sqrt{60} \\ &= 60.81 \text{ gs}^{-1} \end{aligned}$$

17. Correct answer is [30].

$$P_{\text{top}} = P_a - \rho_a g(H + h)$$

$$P_{\text{bottom}} = P_a - \rho g h$$

$$\begin{aligned} \Rightarrow P_{\text{bottom}} - P_{\text{top}} &= \rho_a g(H + h) - \rho g h \\ &= 30 \text{ Nm}^{-2} \end{aligned}$$

OSWAAL

360