

# JEE (Main) CHEMISTRY SOLVED PAPER

**2023**  
06<sup>th</sup> April Shift 1

## General Instructions :

- (i) There are 30 questions in this section.
- (ii) Section A consists of 20 Multiple choice questions and Section B consists of 10 Numerical value type questions. In Section B, candidates have to attempt any five questions out of 10.
- (iii) There will be only one correct choice in the given four choices in Section A. For each question for Section A, 4 marks will be awarded for correct choice, 1 mark will be deducted for incorrect choice questions and zero mark will be awarded for not attempted questions.
- (iv) For Section B questions, 4 marks will be awarded for correct answer and zero for unattempted and incorrect answer.
- (v) Any textual, printed or written material, mobile phones, calculator etc. is not allowed for the students appearing for the test.
- (vi) All calculations/ written work should be done in the rough sheet which is provided with Question Paper.

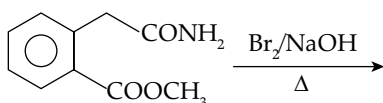
### Section A

1. Match List I with List II

List I Enzymatic reaction	List II Enzyme
(A) Sucrose → Glucose and Fructose	I. Zymase
(B) Glucose → ethyl alcohol and CO <sub>2</sub>	II. Pepsin
(C) Starch → Maltose	III. Invertase
(D) Proteins → Amino acids	IV. Diastase

Choose the correct answer from the options given below:

- (1) (A) – III, (B) – I, (C) – IV (D) – II
  - (2) (A) – I, (B) – IV, (C) – III (D) – II
  - (3) (A) – III, (B) – I, (C) – II (D) – IV
  - (4) (A) – I, (B) – II, (C) – IV (D) – III
2. The standard electrode potential of M<sup>+</sup> / M in aqueous solution does not depend on
- (1) Hydration of a gaseous metal ion
  - (2) Ionisation of a gaseous metal atom
  - (3) Ionisation of a solid metal atom
  - (4) Sublimation of a solid metal
3. The major product formed in the following reaction is

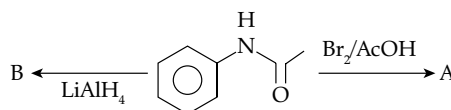


- (1)
- (2)
- (3)
- (4)

4. A compound is formed by two elements X and Y. The element Y forms cubic close packed arrangement and those of element X occupy one third of the tetrahedral voids. What is the formula of the compound?

(1) X<sub>3</sub>Y    (2) XY<sub>3</sub>    (3) X<sub>2</sub>Y<sub>3</sub>    (4) X<sub>3</sub>Y<sub>2</sub>

5. The major products A and B from the following reactions are:



- (1) A =    B =
- (2) A =    B =
- (3) A =    B =
- (4) A =    B =

6. Given below are two statements, one labeled as Assertion A and the other is labeled as Reason R

**Assertion A:** The spin only magnetic moment value for [Fe(CN)<sub>6</sub>]<sup>3-</sup> is 1.74 BM, Whereas for [Fe(H<sub>2</sub>O)<sub>6</sub>]<sup>3+</sup> is 5.92 BM.

**Reason R:** In both complexes, Fe is present in +3 oxidation state.

In the light of the above statements, choose the correct answer from the options given below:

- (1) A is false but R is true
- (2) A is true but R is false

- (3) Both A and R are true but R is not the correct explanation of A  
 (4) Both A and R are true but R is the correct explanation of A

7. Match List I with List II

List I Name of reaction	List II Reagent used
(A) Hell-Volhard-Zelinsky reaction	I. NaOH + I <sub>2</sub>
(B) Iodoform reaction	II. (i) CrO <sub>2</sub> Cl <sub>2</sub> , CS <sub>2</sub> (ii) H <sub>2</sub> O
(C) Etard reaction	III. Br <sub>2</sub> / red phosphorus (ii) H <sub>2</sub> O
(D) Gatterman - Koch reaction	IV. CO, HCl, anhyd. AlCl <sub>3</sub>

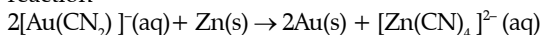
Choose the correct answer from the options given below:

- (1) (A) - III, (B) - I, (C) - IV (D) - II  
 (2) (A) - I, (B) - II, (C) - III (D) - IV  
 (3) (A) - III, (B) - II, (C) - I (D) - IV  
 (4) (A) - III, (B) - I, (C) - II (D) - IV

8. Polymer used in orlon is

- (1) Polyamide (2) Polycarbonate  
 (3) Polythene (4) Polyacrylonitrile

9. Which of the following options are correct for the reaction



- A. Redox reaction  
 B. Displacement reaction  
 C. Decomposition reaction  
 D. Combination reaction

Choose the correct answer from the options given below:

- (1) A only (2) A and D only  
 (3) A and B only (4) C and D only

10. Given below are two statements, one is labelled as Assertion A and the other is labelled as Reason R.

**Assertion A:** Loss of electron from hydrogen atom results in nucleus of  $\sim 1.5 \times 10^{-3}$  pm size.

**Reason R:** Proton (H<sup>+</sup>) always exists in combined form.

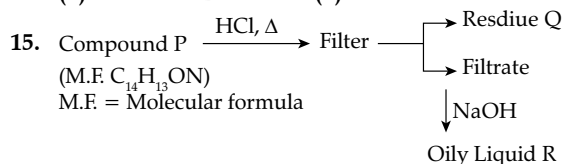
In the light of the above statements, choose the most appropriate answer from the options given below:

- (1) Both A and R are correct and R is the correct explanation of A  
 (2) A is correct but R is not correct  
 (3) Both A and R are correct but R is NOT the correct explanation of A  
 (4) A is not correct but R is correct

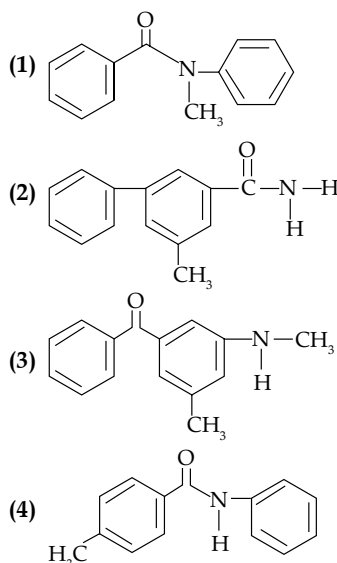
11. For a concentrated solution of a weak electrolyte ( $K_{\text{eq}}$  = equilibrium constant) A<sub>2</sub>B<sub>3</sub> of concentration 'c', the degree of dissociation ' $\alpha$ ' is

- (1)  $\left(\frac{K_{\text{eq}}}{25c^2}\right)^{\frac{1}{5}}$  (2)  $\left(\frac{K_{\text{eq}}}{108c^4}\right)^{\frac{1}{5}}$   
 (3)  $\left(\frac{K_{\text{eq}}}{6c^5}\right)^{\frac{1}{5}}$  (4)  $\left(\frac{K_{\text{eq}}}{5c^4}\right)^{\frac{1}{5}}$

12. The setting time of cement is increased by adding  
 (1) Clay (2) Gypsum  
 (3) Limestone (4) Silica
13. The difference between electron gain enthalpies will be maximum between:  
 (1) Ar and F (2) Ne and F  
 (3) Ar and Cl (4) Ne and Cl
14. Strong reducing and oxidizing agents among the following, respectively, are  
 (1) Ce<sup>3+</sup> and Ce<sup>4+</sup> (2) Eu<sup>2+</sup> and Ce<sup>4+</sup>  
 (3) Ce<sup>4+</sup> and Eu<sup>2+</sup> (4) Ce<sup>4+</sup> and Tb<sup>4+</sup>



Compound P is neutral, Q gives effervescence with NaHCO<sub>3</sub> while R reacts with Hinsbergs reagent to give solid soluble in NaOH. Compound P is



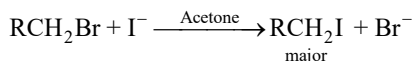
16. Match list I with list II

List I Element detected	List II Reagent used/Product formed
A. Nitrogen	I. Na <sub>2</sub> [Fe(CN) <sub>5</sub> NO]
B. Sulphur	II. AgNO <sub>3</sub>
C. Phosphorous	III. Fe <sub>4</sub> [Fe(CN) <sub>6</sub> ] <sub>3</sub>
D. Halogen	IV. (NH <sub>4</sub> ) <sub>2</sub> MoO <sub>4</sub>

Choose the correct answer from the options given below:

- (1) (A) - III, (B) - I, (C) - IV, (D) - II  
 (2) (A) - II, (B) - I, (C) - IV, (D) - III  
 (3) (A) - II, (B) - IV, (C) - I, (D) - III  
 (4) (A) - IV, (B) - II, (C) - I, (D) - III
17. The possibility of photochemical smog formation is more at  
 (1) Himalayan villages in winter  
 (2) Marshy lands

- (3) Industrial areas  
 (4) The places with healthy vegetation
18. For the reaction



The correct statement is

- (1) The reaction can occur in acetic acid also.  
 (2) The transition state formed in the above reaction is less polar than the localized anion.  
 (3) The solvent used in the reaction solvates the ions formed in rate determining step.  
 (4)  $\text{Br}^-$  can act as competing nucleophile.
19. Match List I with List II

List I Vitamin	List II Deficiency disease
A. Vitamin A	I. Beri-Beri
B. Thiamine	II. Cheilosis
C. Ascorbic acid	III. Xerophthalmia
D. Riboflavin	IV. Scurvy

Choose the correct answer from the options given below:

- (1) (A) – IV, (B) – II, (C) – III, (D) – I  
 (2) (A) – III, (B) – I, (C) – IV, (D) – II  
 (3) (A) – III, (B) – II, (C) – IV, (D) – I  
 (4) (A) – IV, (B) – I, (C) – III, (D) – II
20. Match list I with list II

List I Oxide	List II Type of bond
A. $\text{N}_2\text{O}_4$	I. 1 N = O bond
B. $\text{NO}_2$	II. 1 N – O – N bond
C. $\text{N}_2\text{O}_5$	III. 1 N – N bond
D. $\text{N}_2\text{O}$	IV. 1 N = N / N $\equiv$ N bond

Choose the correct answer from the options given below:

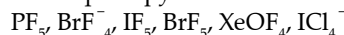
- (1) (A) – III, (B) – I, (C) – IV (D) – II  
 (2) (A) – II, (B) – IV, (C) – III (D) – I  
 (3) (A) – III, (B) – I, (C) – II (D) – IV  
 (4) (A) – II, (B) – I, (C) – III (D) – IV

## Section B

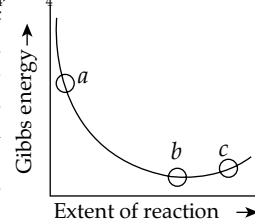
21. Number of bromo derivatives obtained on treating ethane with excess of  $\text{Br}_2$  in diffused sunlight is

22. For the adsorption of hydrogen on platinum, the activation energy is  $30 \text{ kJ mol}^{-1}$  and for the adsorption of hydrogen on nickel, the activation energy is  $41.4 \text{ kJ mol}^{-1}$ . The logarithm of the ratio of the rates of chemisorption on equal areas of the metals at 300 K is \_\_\_\_\_ (Nearest integer)

23. The number of species from the following which have square pyramidal structure is \_\_\_\_\_



24. Consider the graph of Gibbs free energy  $G$  vs Extent of reaction. The number of statement/s from the following which are true with respect to points (a), (b) and (c) is



- A. Reaction is spontaneous at (a) and (b)  
 B. Reaction is at equilibrium at point (b) and non-spontaneous at point (c)  
 C. Reaction is spontaneous at (a) and non-spontaneous at (c)  
 D. Reaction is non-spontaneous at (a) and (b)
25. In ammonium – phosphomolybdate, the oxidation state of Mo is + \_\_\_\_\_
26. Number of ambidentate ligands in a representative metal complex  $[\text{M}(\text{en})(\text{SCN})_4]$  is \_\_\_\_\_ [en = ethylenediamine]
27. Mass of urea ( $\text{NH}_2\text{CONH}_2$ ) required to be dissolved in 1000g of water in order to reduce the vapour pressure of water by 25% is \_\_\_\_\_ g. (Nearest integer)  
**Given:** Molar mass of N, C, O, and H are 14, 12, 16 and 1  $\text{g mol}^{-1}$  respectively.
28. If 5 moles of  $\text{BaCl}_2$  is mixed with 2 moles of  $\text{Na}_3\text{PO}_4$ , the maximum number of moles of  $\text{Ba}_3(\text{PO}_4)_2$  formed is \_\_\_\_\_ (Nearest integer)
29. The value of  $\log K$  for the reaction  $\text{A} \rightleftharpoons \text{B}$  at 298 K is \_\_\_\_\_ (Nearest integer)
30. The wavelength of an electron of kinetic energy  $4.50 \times 10^{-29} \text{ J}$  is \_\_\_\_\_  $\times 10^{-5} \text{ m}$ . (Nearest integer)  
**Given:** mass of electron is  $9 \times 10^{-31} \text{ kg}$ ,  $h = 6.6 \times 10^{-34} \text{ J s}$ .

## Answer Key

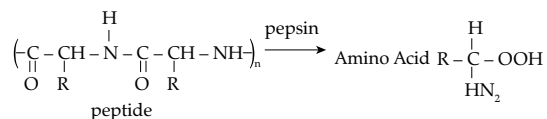
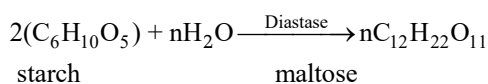
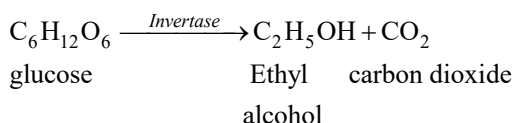
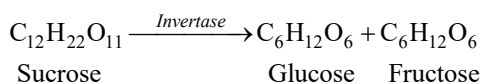
Q. No.	Answer	Topic name	Chapter name
1	(1)	Polysaccharide	Biomolecules
2	(3)	Electrode Potential	Redox and electrode chemistry
3	(2)	Preparations of Amines	Compounds containing N
4	(3)	Solid State	States of Matter
5	(1)	Chemical Properties	Compounds containing N
6	(3)	VBT	Coordination Compounds
7	(4)	Aldehyde, Ketones and Carboxylic Acids	Organic Compounds Containing Oxygen
8	(2)	Copolymerization	Polymers

9	(3)	Redox Reactions	Redox Reaction and Electrochemistry
10	(3)	Properties of H	Hydrogen
11	(2)	Degree of dissociation	Equilibrium
12	(2)	Cement	S-block element
13	(4)	Electron gain enthalpies	Classification of Elements and Periodicity in Properties
14	(2)	Lanthanoides	d and f Block Elements
15	(4)	Separation of Organic Compounds	Practical Organic Chemistry
16	(1)	Detection of N, S, P and Halogens	Purification and characterization of Organic Compounds
17	(3)	Photochemical smog	Environmental Chemistry
18	(2)	Mechanism of Nucleophile Substitution Reaction	Organic Compounds Containing Halogens
19	(2)	Vitamins	Biomolecules
20	(3)	Group-15	p-block Elements
21	[9]	Preparation of Halo alkane	Organic Compounds Halogen
22	[2]	Arrhenius Equation	Chemical Kinetics
23	[1]	Concept of Hybridization	Chemical Bonding and Molecular Structure
24	[1]	Gibb's Free Energy	Thermodynamics
25	[6]	Oxidation Reaction	Redox Reactions
26	[4]	Ambidentate Ligands	Coordination Compounds
27	[1111]	Relative lowering of Vapour pressure	Solutions
28	[3]	Stoichiometry	Basic Concepts of Chemistry
29	[10]	Gibb's free energy	Equilibrium
30	[7]	De-Broglie Wavelength	Atomic structure

## Solutions

### Section A

1. Option (1) is correct.



2. Option (3) is correct.

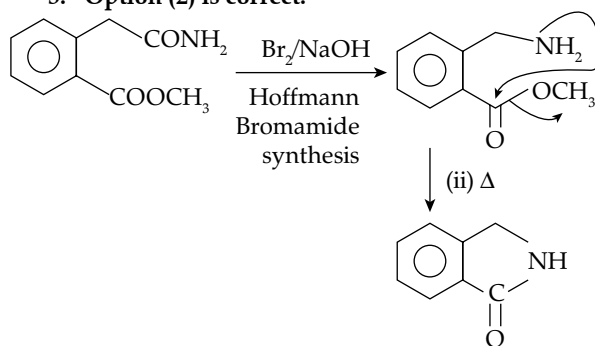
The standard potential in aqueous solution depends on the given factors

(i) The hydration of a gaseous atom.

(ii) Ionization of gaseous metal atom

(iii) Sublimation of a solid metal

3. Option (2) is correct.



4. Option (3) is correct.

Given, An element Y forms cubic close packed arrangement so its atom would occupy the corners and the face of the lattice.

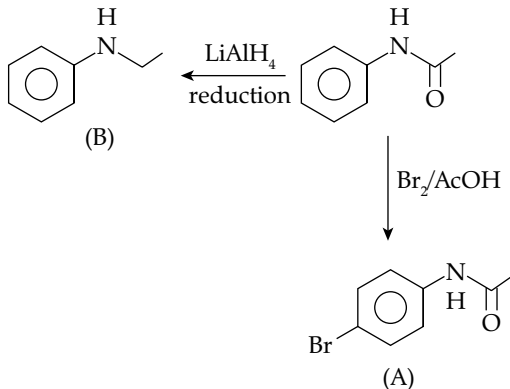
$$\therefore \text{No. of Y atoms} = \left( \frac{1}{8} \times 8 \right) + \left( \frac{1}{2} \times 6 \right) = 4$$

No. of tetrahedral voids = 8

$$\text{No. of X atoms} = \frac{1}{3} \times 8 = \frac{8}{3}$$

Formula  $X_{8/3}Y_4 = X_2Y_3$

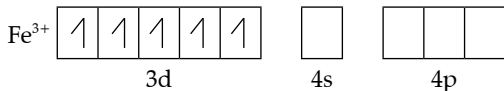
5. Option (1) is correct.



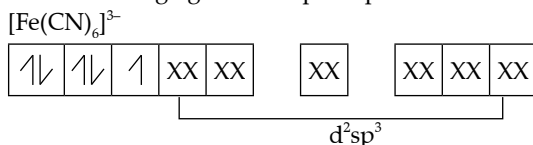
6. Option (3) is correct.

The oxidation state of Fe on both the complexes would be +3

In  $[\text{Fe}(\text{CN})_6]^{3-}$  The electronic configuration of Fe is  $3d^64s^2$



$\text{CN}^-$  is a strong ligands will pair up the electrons



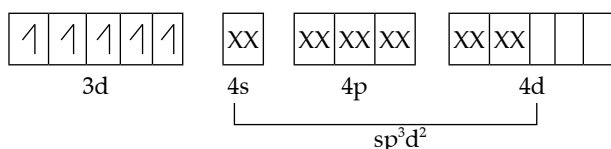
No. of unpaired electrons = 1

$$\mu = \sqrt{n(n+2)} = \sqrt{1 \times (1+2)} = \sqrt{3} = 1.74 \text{ m}$$

In  $[\text{Fe}(\text{H}_2\text{O})_6]^{3+}$

As  $\text{H}_2\text{O}$  is a weak ligand it will not pair up  $e^-$ s.

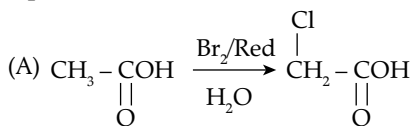
$[\text{Fe}(\text{H}_2\text{O})_6]^{3+}$



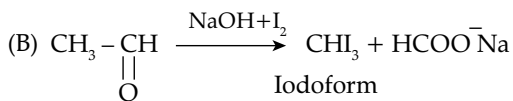
No. of unpaired electron = 5

$$\mu = \sqrt{5(5+2)} = \sqrt{35} = 5.92 \text{ BM}$$

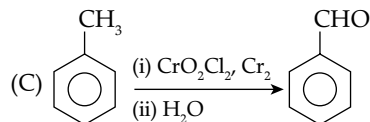
7. Option (4) is correct.



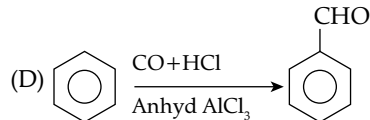
This reaction is Hell-volhard reaction.



This reaction is iodoform reaction.



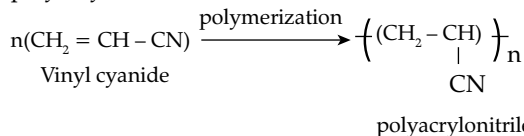
This reaction is Etard reaction.



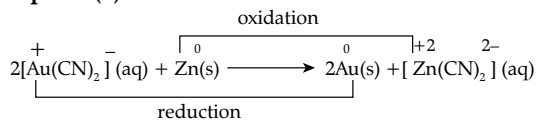
This is Gattermann Koch Reaction.

8. Option (2) is correct.

Polymer that is used in the manufacture in orlon is polyacrylonitrile.



9. Option (3) is correct.

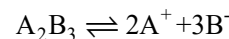


Since both oxidation and reduction take place simultaneously. So, it is a redox reaction. Also Zn is displacing Au from its salt solution. This is also a displacement reaction.

10. Option (3) is correct.

Loss of the electron from H atom results in nucleus of  $1.5 \times 10^{-3}$  pm size. As a consequence of its extremely small size, it always exist in combined state.

11. Option (2) is correct.



$$K_{\text{eq}} = \frac{[\text{A}^+]^2 [\text{B}^-]^3}{[\text{A}_2\text{B}_3]} = \frac{[2\text{C}\alpha]^2 [3\text{C}\alpha]^3}{[\text{C} - \text{C}\alpha]} = \frac{108\text{C}^5\alpha^5}{\text{C}(1-\alpha)}$$

$$\therefore \frac{108\text{C}^5\alpha^5}{\text{C}} \quad (\text{For dilute solution } 1 > \alpha)$$

$$K_{\text{eq}} = 108\text{C}^4\alpha^5, \quad \alpha = \left( \frac{K_{\text{eq}}}{108\text{C}^4} \right)^{1/5}$$

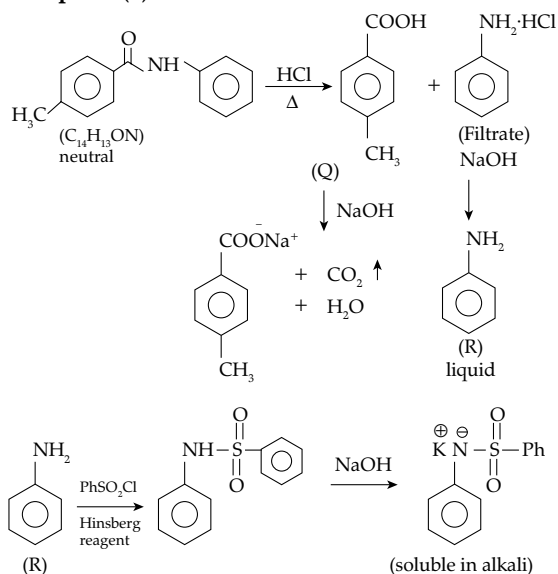
12. Option (2) is correct.

The setting time of cement can be increased by adding gypsum. It is hydrated calcium sulphate ( $\text{CaSO}_4 \cdot 2\text{H}_2\text{O}$ ). Cement manufacturing requires about 2-3% of gypsum.

13. Option (4) is correct.

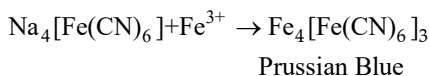
The difference between electron gain enthalpies will be maximum between Ne and Cl. This is because chlorine has the highest electron gain enthalpy and neon being inert gas, will have least electron enthalpy.

15. Option (4) is correct.

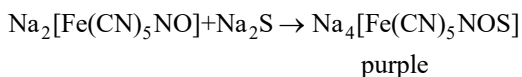


16. Option (1) is correct.

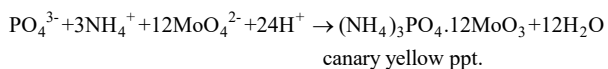
Nitrogen can be detected by lassaigne's method where the product formed is Prussian blue in color.



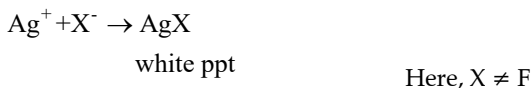
Sulphur is detected by sodium nitroprusside reagent.



Phosphorus is detected by ammonium molybdate



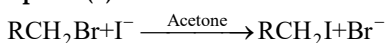
Halogen can be detected by  $\text{AgNO}_3$



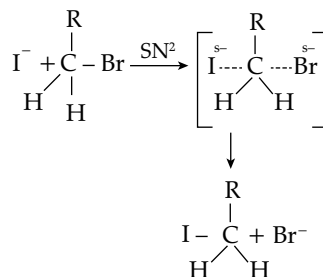
17. Option (3) is correct.

Photochemical smog also known as summer smog occurs in warm, dry and sunny climate. It is produced when ultraviolet light from sun reacts with oxides of nitrogen in the atmosphere. These oxides of nitrogen are mainly produced by industries such as automobiles.

18. Option (2) is correct.



The above reaction is an halogen exchange reaction which occurs via  $\text{SN}^2$  mechanism as there is a primary halide ( $\text{RCH}_2\text{Br}$ ). Thus, the transition state is formed in this reaction is less polar than the localized anion. It is a single step reaction which thus there will be no RDS. Also  $\text{I}^-$  is a better nucleophile than  $\text{Br}^-$ .

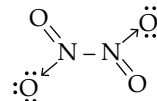


19. Option (2) is correct.

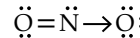
Deficiency of vitamin A causes xerophthalmia. Deficiency of thiamine causes Beri-Beri whereas scurvy is caused by deficiency of ascorbic acid, Riboflavin which is vitamin  $\text{B}_{12}$  deficiency causes calories.

20. Option (3) is correct.

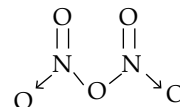
The structures of the given molecules are as following:



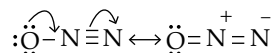
It has 2N=O, 2N-O and / 1N-N



It has 1N=O and 1N-O bond



It has 2N=O, 2N-O and 1N-O-N bond.

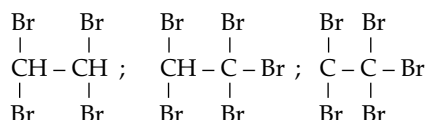
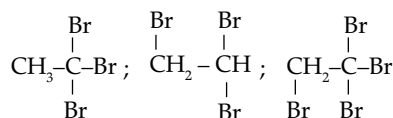
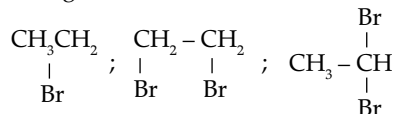


It shows both  $\text{N} \equiv \text{N}$  as well as  $\text{N} = \text{N}$  in its resonating structures.

## Section B

21. Correct answer is [9].

Different bromo derivatives that are obtained on treating ethane with excess of  $\text{Br}_2$  in diffused sunlight is



22. Correct answer is [2].

From Arrhenius Equation.

$$K = A e^{-E_a/RT}$$

The Arrhenius equation for adsorption of hydrogen on platinum will be

$$K_1 = Ae^{-E_{a1}/RT} \quad \dots (i)$$

The Arrhenius equation for adsorption of hydrogen on Nickel will be

$$K_2 = Ae^{-E_{a2}/RT} \quad \dots (ii)$$

Dividing the above equation

$$\frac{K_1}{K_2} = e^{1/RT(E_{a2} - E_{a1})}$$

Taking log on both sides

$$\log \frac{K_1}{K_2} = \frac{1}{2.303RT} [E_{a2} - E_{a1}]$$

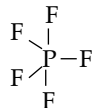
$$\log \frac{K_1}{K_2} = \frac{1}{2.303 \times 8.314 \times 300} [(4.14 - 30) \times 10^3]$$

$$\log \frac{K_1}{K_2} = 1.99 \approx 2$$

**23. Correct answer is [1].**

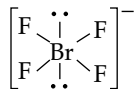
The structures of given molecules are as follows:

PF<sub>5</sub>



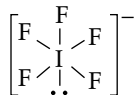
Trigonal bipyramidal (sp<sup>3</sup>d<sup>2</sup>+0lp)

BrF<sub>4</sub><sup>-</sup>



Square planar (sp<sup>3</sup>d<sup>2</sup>+2lp)

IF<sub>5</sub>



Square pyramidal (sp<sup>3</sup>d<sup>2</sup>+1lp)

BrF<sub>5</sub>



Square pyramidal. (sp<sup>3</sup>d<sup>2</sup>+1lp)

XeOF<sub>4</sub>



Square pyramidal (sp<sup>3</sup>d<sup>2</sup>+1lp)

**24. Correct answer is [1].**

As the value of  $\Delta G$  is decreasing at a point a i.e. it has a negative value, so the reaction would be spontaneous. At point c, the of  $\Delta G$  is increasing at C i.e. it has a positive value, then the reaction is non spontaneous.

**25. Correct answer is [6].**

The formula for ammonium phosphomolybdate is (NH<sub>4</sub>)<sub>3</sub>PMo<sub>12</sub>O<sub>40</sub>

Let the oxidation of Mo be x.

$$\therefore 3(+1) + 1(+5) + 12(x) + 40(-2) = 0$$

$$12x = 72$$

$$x = +6$$

**26. Correct answer is [4].**

Ambident ligands are those ligands which have two ligating sites but at a time only one of the ligand can form a bond with metal.

In the given SCN<sup>-</sup> is an ambident nucleophile. Thus number of ambident ligands in [M(en)(SCN)<sub>4</sub>] are four.

**27. Correct answer is [1111].**

Let the given mass of urea be m molecular mass of urea (NH<sub>2</sub>CONH<sub>2</sub>)

$$= 14 \times 2 + 1 \times 4 + 1 \times 12 + 1 \times 16 = 60$$

The relative lowering of vapour pressure is given by

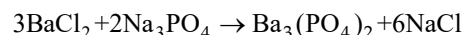
$$\frac{P^0 - P_s}{P^0} = x_{\text{solute}}$$

$$\frac{25}{100} = \frac{n_{\text{urea}}}{n_{\text{urea}} + n_{\text{H}_2\text{O}}} \Rightarrow \frac{25}{100} = \frac{m/60}{\frac{m}{60} + \frac{1000}{18}}$$

$$\frac{4m}{60} = \frac{m}{60} + \frac{1000}{18} \Rightarrow m = \frac{1000 \times 20}{18} = 1111.11 \approx 1111$$

**28. Correct answer is [3.33].**

The reaction between BaCl<sub>2</sub> with Na<sub>3</sub>PO<sub>4</sub> is given as :



In this reaction 3 moles of BaCl<sub>2</sub> reacts with 2 moles of Na<sub>3</sub>PO<sub>4</sub>

Hence 5 moles of BaCl<sub>2</sub> will require

$$= \frac{2}{3} \times 5 = 3.33 \text{ moles of Na}_3\text{PO}_4$$

**29. Correct answer is [10].**

We know that

$$\Delta G^\circ = \Delta H^\circ - T\Delta S^\circ$$

$$= 54.07 - 298 \times 10 \times 10^{-3}$$

$$= -57.05 \text{ KJ/mole or } 57050 \text{ J}$$

$$\text{Also, } \Delta G^\circ = -RT \ln K = -2.303RT \log K$$

$$57050 = -2.303 \times 8.314 \times 298 \log K$$

$$10 = \log K$$

**30. Correct answer is [7].**

Given kinetic energy =  $4.50 \times 10^{-29} \text{ J}$

$$\lambda = \frac{h}{\sqrt{2mKE}} = \frac{6.6 \times 10^{-34}}{\sqrt{2 \times 9 \times 10^{-31} \times 4.50 \times 10^{-29}}}$$

$$= \frac{6.6 \times 10^{-34}}{9 \times 10^{-30}} \approx 7 \times 10^{-5} \text{ m}$$