
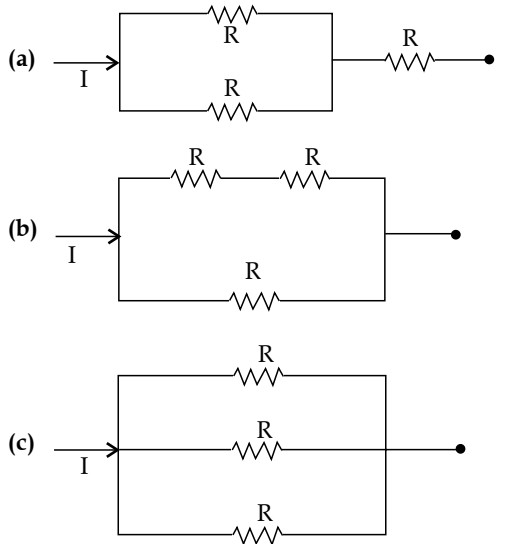


# JEE (Main) PHYSICS SOLVED PAPER

**2023**  
13<sup>th</sup> April Shift 1

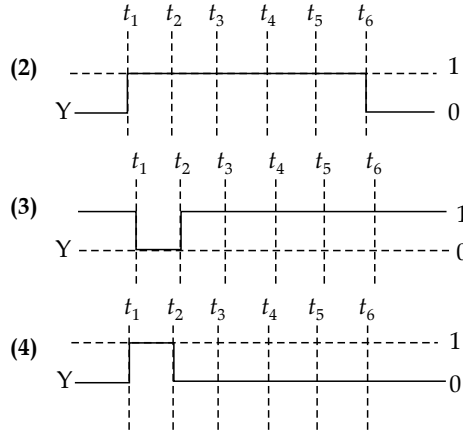
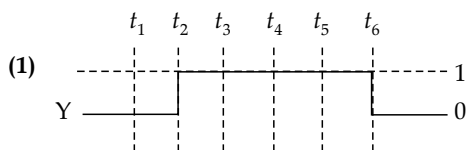
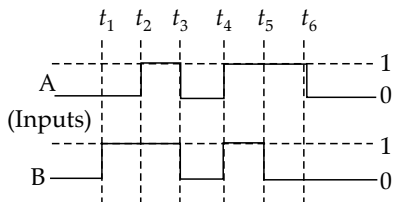
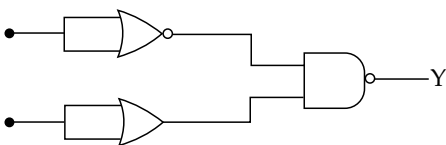
## Section A

**Q. 1.** Different combination of 3 resistors of equal resistance  $R$  are shown in the figures. The increasing order for power dissipation is:



- (1)  $P_C < P_B < P_A < P_D$  (2)  $P_C < P_D < P_A < P_B$   
 (3)  $P_B < P_C < P_D < P_A$  (4)  $P_A < P_B < P_C < P_D$

**Q. 2.** For the following circuit and given inputs A and B, choose the correct option for output 'Y'



**Q. 3.** A bullet of 10 g leaves the barrel of gun with a velocity of  $600 \text{ m s}^{-1}$ . If the barrel of gun is 50 cm long and mass of gun is 3 kg, then value of impulse supplied to the gun will be:

- (1) 12 N s (2) 6 N s (3) 3 N s (4) 36 N s

**Q. 4.** Which of the following Maxwell's equation is valid for time varying conditions but not valid for static conditions:

- (1)  $\oint \vec{D} \cdot d\vec{A} = Q$  (2)  $\oint \vec{E} \cdot d\vec{l} = -\frac{\partial \phi_B}{\partial t}$   
 (3)  $\oint \vec{E} \cdot d\vec{l} = 0$  (4)  $\oint \vec{B} \cdot d\vec{l} = \mu_0 I$

**Q. 5.** Match List - I with List - II

List - I (Layer of atmosphere)	List - II (Approximate height over earth's surface)
(A) F1 - Layer	(I) 10 km
(B) D - Layer	(II) 170 - 190 km
(C) Troposphere	(III) 100 km
(D) E - layer	(IV) 65 - 75 km

Choose the correct answer from the options given below:

- (1) A - II, B - I, C - IV, D - III  
 (2) A - II, B - IV, C - III, D - I  
 (3) A - II, B - IV, C - I, D - III  
 (4) A - III, B - IV, C - I, D - II

**Q. 6.** The r.m.s. speed of oxygen molecule in a vessel at

particular temperature is  $\left(1 + \frac{5}{x}\right)^{1/2} v$ , where  $v$  is the average speed of the molecule. The value of  $x$  will be: (Take  $\pi = \frac{22}{7}$ )

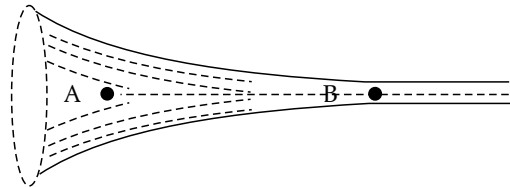
- (1) 28 (2) 27 (3) 8 (4) 4

Q. 7. The ratio of powers of two motors is  $\frac{3\sqrt{x}}{\sqrt{x+1}}$ , that are capable of raising 300 kg water in 5 minutes and 50 kg water in 2 minutes respectively from a well of 100 m deep. The value of  $x$  will be  
 (1) 16 (2) 2 (3) 4 (4) 2.4

Q. 8. Two trains 'A' and 'B' of length ' $l$ ' and ' $4l$ ' are travelling into a tunnel of length ' $L$ ' in parallel tracks from opposite directions with velocities 108 km/h and 72 km/h, respectively. If train 'A' takes 35s less time than train 'B' to cross the tunnel then, length ' $L$ ' of tunnel is: (Given  $L = 60l$ )  
 (1) 2700 m (2) 1800 m (3) 1200 m (4) 900 m

Q. 9. Two bodies are having kinetic energies in the ratio 16 : 9. If they have same linear momentum, the ratio of their masses respectively is:  
 (1) 16 : 9 (2) 4 : 3 (3) 9 : 16 (4) 3 : 4

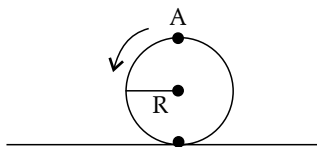
Q. 10. The figure shows a liquid of given density flowing steadily in horizontal tube of varying cross-section. Cross sectional areas at A is  $1.5 \text{ cm}^2$ , and B is  $25 \text{ mm}^2$ , if the speed of liquid at B is 60 cm then  $(P_A - P_B)$  is:  
 (Given  $P_A$  and  $P_B$  are liquid pressures at A and B points)  
 Density  $\rho = 1000 \text{ kg m}^{-3}$   
 A and B are on the axis of tube



(1) 175 Pa (2) 36 Pa (3) 27 Pa (4) 135 Pa

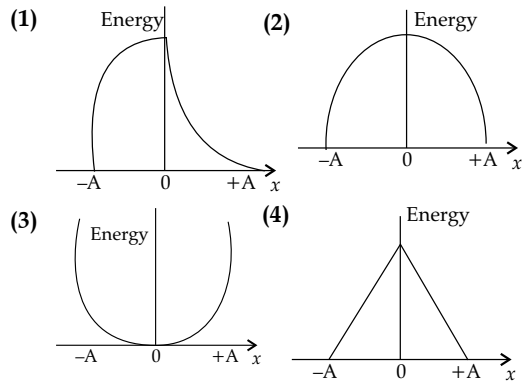
Q. 11.  ${}_{92}^{238}\text{A} \rightarrow {}_{90}^{234}\text{B} + {}_2^4\text{D} + \text{Q}$   
 In the given nuclear reaction, the approximate amount of energy released will be:  
 [Given, mass of  ${}_{92}^{238}\text{A} = 238.05079 \times 931.5 \text{ MeV}/c^2$ ,  
 mass of  ${}_{90}^{234}\text{B} = 234.04363 \times 931.5 \text{ MeV}/c^2$ ,  
 mass of  ${}_2^4\text{D} = 4.00260 \times 931.5 \text{ MeV}/c^2$ ]  
 (1) 4.25 MeV (2) 5.9 MeV  
 (3) 3.82 MeV (4) 2.12 MeV

Q. 12. A disc is rolling without slipping on a surface. The radius of the disc is  $R$ . At  $t = 0$ , the top most point on the disc is A as shown in figure. When the disc completes half of its rotation, the displacement of point A from its initial position is:



(1)  $2R\sqrt{1+4\pi^2}$  (2)  $R\sqrt{\pi^2+4}$   
 (3)  $2R$  (4)  $R\sqrt{\pi^2+1}$

Q. 13. Which graph represents the difference between total energy and potential energy of a particle executing SHM vs. its distance from mean position?



Q. 14. Two charges each of magnitude 0.01 C and separated by a distance of 0.4 mm constitute an electric dipole. If the dipole is placed in an uniform electric field ' $\vec{E}$ ' of 10 dyne  $\text{C}^{-1}$  making  $30^\circ$  angle with  $\vec{E}$ , the magnitude of torque acting on dipole is:  
 (1)  $1.5 \times 10^{-9} \text{ N m}$  (2)  $2.0 \times 10^{-10} \text{ N m}$   
 (3)  $1.0 \times 10^{-8} \text{ N m}$  (4)  $4.0 \times 10^{-10} \text{ N m}$

Q. 15. Under isothermal condition, the pressure of a gas is given by  $P = aV^{-3}$ , where  $a$  is a constant and  $V$  is the volume of the gas. The bulk modulus at constant temperature is equal to  
 (1)  $\frac{P}{2}$  (2)  $2P$  (3)  $P$  (4)  $3P$

Q. 16. A planet having mass  $9 M_e$  and radius  $4 R_e$ , where  $M_e$  and  $R_e$  are mass and radius of earth respectively, has escape velocity in km given by: (Given escape velocity on earth  $s^{-1} V_e = 11.2 \times 10^3 \text{ m s}^{-1}$ )  
 (1) 11.2 (2) 67.2 (3) 33.6 (4) 16.8

Q. 17. A body of mass  $(5 \pm 0.5) \text{ kg}$  is moving with a velocity of  $(20 \pm 0.4) \text{ m s}^{-1}$ . Its kinetic energy will be:  
 (1)  $(1000 \pm 140) \text{ J}$  (2)  $(500 \pm 140) \text{ J}$   
 (3)  $(500 \pm 0.14) \text{ J}$  (4)  $(1000 \pm 0.14) \text{ J}$

Q. 18. The difference between threshold wavelengths for two metal surfaces A and B having work function,  $\phi_A = 9 \text{ eV}$  and  $\phi_B = 4.5 \text{ eV}$  in  $\text{nm}$  is: {Given,  $hc = 1242 \text{ eV nm}$ }  
 (1) 276 (2) 264 (3) 540 (4) 138

Q. 19. The source of time varying magnetic field may be:  
 (A) A permanent magnet  
 (B) An electric field changing linearly with time  
 (C) Direct current  
 (D) A decelerating charge particle  
 (E) An antenna fed with a digital signal  
 Choose the correct answer from the options given below:  
 (1) (B) and (D) only (2) (C) and (E) only  
 (3) (D) only (4) (A) only

Q. 20. A vessel of depth 'd' is half filled with oil of refractive index  $n_1$  and the other half is filled with water of refractive index  $n_2$ . The apparent depth of this vessel when viewed from above will be:

- (1)  $\frac{d(n_1 + n_2)}{2n_1n_2}$       (2)  $\frac{dn_1n_2}{(n_1 + n_2)}$   
 (3)  $\frac{dn_1n_2}{2(n_1 + n_2)}$       (4)  $\frac{2d(n_1 + n_2)}{n_1n_2}$

**Section B**

Q. 21. When a resistance of  $5\ \Omega$  is shunted with a moving coil galvanometer, it shows a full scale deflection for a current of 250 mA. However when  $1050\ \Omega$  resistance is connected with it in series, it gives full scale deflection for 25 volt. The resistance of galvanometer is \_\_\_\_\_  $\Omega$ .

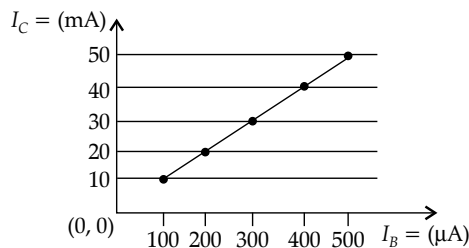
Q. 22. The radius of 2<sup>nd</sup> orbit of  $\text{He}^+$  of Bohr's model is  $r_1$  and that of fourth orbit of  $\text{Be}^{3+}$  is represented as  $r_2$ . Now the ratio  $\frac{r_2}{r_1}$  is  $x : 1$ . The value of  $x$  is \_\_\_\_\_.

Q. 23. A solid sphere is rolling on a horizontal plane without slipping. If the ratio of angular momentum about axis of rotation of the sphere to the total energy of moving sphere is  $\pi : 22$ , the value of its angular speed will be  $\text{rad s}^{-1}$ .

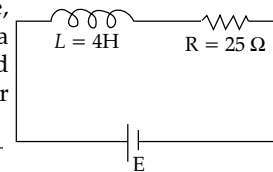
Q. 24. A fish rising vertically upward with a uniform velocity of  $8\ \text{m s}^{-1}$ , observes that a bird is diving vertically downward towards the fish with the velocity of  $12\ \text{m s}^{-1}$ . If the refractive index of water is  $\frac{4}{3}$ , then the actual velocity of the diving bird to pick the fish, will be \_\_\_\_\_  $\text{m s}^{-1}$ .

Q. 25. The elastic potential energy stored in a steel wire of length 20 m stretched through 2 cm is 80 J. The cross sectional area of the wire is \_\_\_\_\_  $\text{mm}^2$ .  
 (Given,  $y = 2.0 \times 10^{11}\ \text{N m}^{-2}$ )

Q. 26. From the given transfer characteristic of a transistor in CE configuration, the value of power gain of this configuration is  $10^x$ , for  $R_B = 10\ \text{k}\Omega$ ,  $R_C = 1\ \text{k}\Omega$ . The value of  $x$  is \_\_\_\_\_.



Q. 27. In the given figure, an inductor and a resistor are connected in series with a battery



of emf  $E$  volt.  $\frac{E^a}{2b}\ \text{J s}^{-1}$  represents the maximum rate at which the energy is stored in the magnetic field (inductor). The numerical value of  $\frac{b}{a}$  will be \_\_\_\_\_.

Q. 28. A potential  $V_0$  is applied across a uniform wire of resistance  $R$ . The power dissipation is  $P_1$ . The wire is then cut into two equal halves and a potential of  $V_0$  is applied across the length of each half. The total power dissipation across two wires is  $P_2$ . The ratio  $P_2 : P_1$  is  $\sqrt{x} : 1$ . The value of  $x$  is \_\_\_\_\_.

Q. 29. At a given point of time the value of displacement of a simple harmonic oscillator is given as  $y = A \cos(30^\circ)$ . If amplitude is 40 cm and kinetic energy at that time is 200 J, the value of force constant is  $1.0 \times 10^x\ \text{N m}^{-1}$ . The value of  $x$  is \_\_\_\_\_.

Q. 30. A thin infinite sheet charge and an infinite line charge of respective charge densities  $+\sigma$  and  $+\lambda$  are placed parallel at 5 m distance from each other. Points 'P' and 'Q' are at  $\frac{3}{\pi}\ \text{m}$  and  $\frac{4}{\pi}\ \text{m}$  perpendicular distances from line charge towards sheet charge, respectively. ' $E_P$ ' and ' $E_Q$ ' are the magnitudes of resultant electric field intensities at point 'P' and 'Q' respectively. If  $\frac{E_P}{E_Q} = \frac{4}{a}$  for  $2|\sigma| = |\lambda|$ , then the value of  $a$  is \_\_\_\_\_.

**Answer Key**

Q. No.	Answer	Topic Name	Chapter Name
1	(1)	Power of electric circuit	Electric current
2	(3)	Logic gates	Semiconductors
3	(2)	Momentum conservation principle	Newton's laws of motion
4	(2)	Mawell's equation	Magnetism and Matter
5	(3)	Layers of atmosphere	Communication system
6	(1)	Speed of gas molecules	Kinetic theory of gases
7	(1)	Power	Work, Energy and Power
8	(2)	Uniform velocity	Motion in a straight line

9	(3)	Kinetic energy	Work, Energy and Power
10	(1)	Bernoulli's equation	Properties of fluid
11	(1)	Mass energy equivalence	Nuclei
12	(2)	Displacement	Motion in one dimension
13	(2)	Kinetic and potential energies	Oscillation and waves
14	(2)	Electric dipole in electric field	Electrostatics
15	(4)	Thermodynamic processes	Thermodynamics
16	(4)	Escape velocity	Gravitation
17	(1)	Percentage error	Units & Dimensions
18	(4)	Work function	Photoelectric effect
19	(3)	Transverse nature of EM wave	Electromagnetic waves
20	(1)	Refraction	Ray optics
21	[50]	Moving coil galvanometer	Magnetic effect of current and Magnetism
22	[2]	Bohr's Model	Atoms
23	[4]	Kinetic energy	Rotational Motion
24	[3]	Refraction	Ray optics
25	[40]	Energy stored in stretched wire	Properties of solid
26	[3]	Transistor	Semiconductors
27	[25]	RL circuit	AC current
28	[16]	Power of electric circuit	Electric current
29	[4]	Kinetic and Potential energies	Oscillation and Waves
30	[6]	Electric field	Electrostatics

## SOLUTIONS

### Section A

1. Option (1) is correct.

$$(A) R_1 = \frac{R}{2} + R = \frac{3R}{2}, \quad P_1 = I^2 R_1 = I^2 \left( \frac{3R}{2} \right)$$

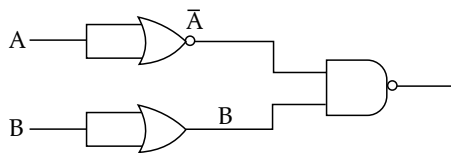
$$(B) R_2 = \frac{2R}{3}, \quad P_2 = I^2 R_2 = I^2 \left( \frac{2R}{3} \right)$$

$$(C) R_3 = \frac{R}{3}, \quad P_3 = I^2 R_3 = I^2 \left( \frac{R}{3} \right)$$

$$(D) R_4 = 3R, \quad P_4 = I^2 R_4 = I^2 (3R)$$

from above, increasing order of power dissipation is  $P_C < P_B < P_A < P_D$

2. Option (3) is correct.



$$Y = \overline{\overline{A} \cdot \overline{B}} = \overline{\overline{A + B}} = A + B$$

	A	B	$\overline{B}$	$A + \overline{B}$
$0 - t_1$	0	0	1	1
$t_1 - t_2$	0	1	0	0
$t_2 - t_3$	1	1	0	1
$t_3 - t_4$	0	0	1	1
$t_4 - t_5$	1	1	0	1
$t_5 - t_6$	1	0	1	1
$t_6 - t$	0	0	1	1

3. Option (2) is correct.

Impulse = change in momentum

$$|\vec{J}| = |\Delta \vec{p}| = mv - 0$$

$$= \frac{10}{1000} \times 600 - 0 = 6 \text{ (N s)}$$

4. Option (2) is correct.

For static conditions  $\oint \vec{E} \cdot d\vec{l} = 0$

For time varying conditions,  $\oint \vec{E} \cdot d\vec{l} = -\frac{\partial \phi_B}{\partial t}$

Which is Faraday's law of electromagnetism.

5. Option (3) is correct.

In the increasing order of heights, various layers of atmosphere can be arranged as:

Troposphere < D-layer < E layer < F1 layer.

6. Option (1) is correct.

$$v_{rms} = \sqrt{\frac{3RT}{M}} \quad \text{and} \quad v_{av} = \sqrt{\frac{8RT}{\pi M}} = v$$

$$\Rightarrow \sqrt{\frac{RT}{M}} = \sqrt{\frac{\pi}{8}} v$$

$$\therefore v_{rms} = \sqrt{3} \times \sqrt{\frac{\pi}{8}} v$$

$$v_{rms} = \sqrt{\frac{3\pi}{8}} v = \sqrt{1 + \frac{5}{x}} v$$

$$\Rightarrow \frac{3\pi}{8} - 1 = \frac{5}{x} \Rightarrow \frac{3}{8} \times \frac{22}{7} - 1 = \frac{5}{x}$$

$$\Rightarrow \frac{66}{56} - 1 = \frac{5}{x} \Rightarrow \frac{10}{56} = \frac{5}{x}$$

$$\Rightarrow x = 28$$

7. **Option (1) is correct.**

$$P = \frac{W}{t} = \frac{mgh}{t} \Rightarrow \frac{P_1}{P_2} = \frac{m_1}{m_2} \times \frac{t_2}{t_1}$$

$$\frac{3\sqrt{x}}{\sqrt{x}+1} = \frac{300}{50} \times \frac{2}{5} = \frac{12}{5}$$

Squaring, we get

$$\frac{9x}{x+1+2\sqrt{x}} = \frac{144}{25}$$

$$25x = 16x + 16 + 32\sqrt{x}$$

$$9x - 32\sqrt{x} - 16 = 0 \text{ Let } \sqrt{x} = p$$

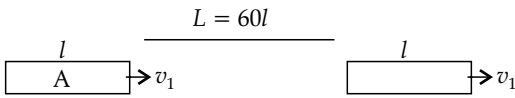
$$9p^2 - 32p - 16 = 0$$

$$p = \frac{32 + \sqrt{1024 + 576}}{18} \Rightarrow p = \frac{32 + \sqrt{1600}}{18} = \frac{72}{18}$$

$$p = 4 = \sqrt{x}$$

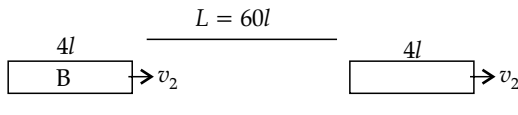
$$\therefore x = 16$$

8. **Option (2) is correct.**



$$t_1 = \frac{61l}{v_1} \Rightarrow v_1 = 108 \text{ km h}^{-1} = 108 \times \frac{5}{18} = 30 \text{ m s}^{-1}$$

$$t_1 = \frac{61l}{30} \text{ s}$$



$$t_2 = \frac{64l}{v_2} \Rightarrow v_2 = 72 \text{ km/h} = 72 \times \frac{5}{18} = 20 \text{ m/s}$$

$$t_2 = \frac{64l}{20}$$

Given  $t_1 = t_2 - 35 \Rightarrow \frac{61l}{30} = \frac{64l}{20} - 35$

On solving,  $l = 30 \text{ m}$   
Length of the tunnel,  $L = 60l = 1800 \text{ m}$

9. **Option (3) is correct.**

$$KE = \frac{p^2}{2m} \Rightarrow KE \propto \frac{1}{m} \Rightarrow \frac{m_1}{m_2} = \frac{KE_2}{KE_1} = \left(\frac{16}{9}\right)^{-1}$$

$$\frac{m_1}{m_2} = \frac{9}{16}$$

10. **Option (1) is correct.**

From Bernoulli's theorem

$$p_A + \frac{1}{2}\rho v_A^2 = p_B + \frac{1}{2}\rho v_B^2$$

$$p_A - p_B = \frac{1}{2}\rho(v_B^2 - v_A^2)$$

From equation of continuity,

$$A_A v_A = A_B v_B$$

$$1.5 \times v_A = 0.25 \times 60$$

$$v_A = 10 \text{ cm s}^{-1}$$

$$\therefore p_A - p_B = \frac{1}{2} \times 1000(3600 - 100) \times 10^{-4} = 175 \text{ Pa}$$

11. **Option (1) is correct.**

Q value of the given nuclear reaction

$$= \left[ \sum m_{\text{reactants}} - \sum m_{\text{products}} \right] \times C^2 \text{ J}$$

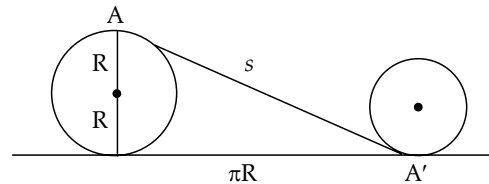
$$= \left[ \sum m_{\text{reactants}} - \sum m_{\text{products}} \right] \times 931.5 \text{ Me V}$$

In a.m.u.

$$= [238.05079 - 234.04363 - 4.00260] \times 931.5$$

$$= 4.25 \text{ Me V}$$

12. **Option (2) is correct.**



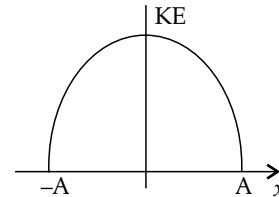
Displacement of point A after half rotation

$$= \sqrt{4R^2 + \pi^2 R^2} = R\sqrt{4 + \pi^2}$$

13. **Option (2) is correct.**

KE of a particle in SHM is given by

$$KE = \frac{1}{2}K(A^2 - x^2)$$



At  $x = \pm A$ ,  $KE = 0$  (Minimum)

At  $x = 0$ ,  $KE = \frac{1}{2}KA^2$  (Maximum)

14. **Option (2) is correct.**

Torque on a dipole in a uniform electric field is given by  $\tau = pE \sin \theta$

$$p = ql = 0.01 \times 0.4 \times 10^{-3} = 4 \times 10^{-6} \text{ cm}$$

$$\tau = 4 \times 10^{-6} \times 10 \times 10^{-5} \times \sin 30^\circ = 2 \times 10^{-10} \text{ N m}$$

15. **Option (4) is correct.**

Given process,  $PV^3 = a = \text{constant}$   
Differentiating on both sides, we get

$$V^3 \Delta P + P [3V^2 \Delta V] = 0$$

$$B = \frac{-\Delta P}{\frac{\Delta V}{V}} = 3P$$

16. **Option (4) is correct.**

Escape velocity,  $V_e = \sqrt{\frac{2GM}{R}}$

For the planet,  $M' = 9M$  and  $R' = 4R$

$$V_e' = \sqrt{\frac{2G(9M)}{4R}} = \frac{3}{2}V_e = \frac{3}{2} \times 11.2 = 16.8 \text{ km s}^{-1}$$

17. Option (1) is correct.

$$K = \frac{1}{2}mv^2 \Rightarrow \frac{\Delta K}{K} = \frac{\Delta m}{m} + \frac{2\Delta v}{v}$$

Given  $m = (5 \pm 0.5) \text{ kg}$

$$v = (20 \pm 0.4) \text{ m s}^{-1}$$

$$K = \frac{1}{2}mv^2 = \frac{1}{2} \times 5 \times 400 = 1000 \text{ J}$$

$$\frac{\Delta K}{1000} = \frac{0.5}{5} + 2\left(\frac{0.4}{20}\right) = (0.1 + 0.04)$$

$$\Delta K = 1000(0.14) = 140 \text{ J} \Rightarrow K = (1000 \pm 140) \text{ J}$$

18. Option (4) is correct.

From Einstein's photoelectric equation

$$\frac{hc}{\lambda} = \phi + KE_{max}$$

$$\phi = \text{work function} = \frac{hc}{\lambda_0} \text{ J} = \frac{hc}{\lambda_0 e} (\text{eV})$$

$$9 = \frac{1242}{\lambda_{01} (\text{n m})}$$

$$\Rightarrow \lambda_{01} = \frac{1242}{9} \Rightarrow 4.5 = \frac{1242}{\lambda_{02} (\text{n m})} \Rightarrow \lambda_{02} = \frac{1242}{4.5}$$

$$\lambda_{02} - \lambda_{01} = 1242 \left( \frac{1}{4.5} - \frac{1}{9} \right) \text{ n m} = 1242 \times \frac{1}{9} = 138 \text{ n m}$$

19. Option (3) is correct.

From Maxwell's equation for EM waves,

$$\oint \vec{B} \cdot d\vec{l} = \mu_0 i + \mu_0 \epsilon_0 \frac{d\phi_E}{dt} \Rightarrow \frac{d\phi_E}{dt} = A \frac{dE}{dt}$$

If  $E$  is a linear function in time,  $\frac{dE}{dt} = \text{constant}$

As accelerated or decelerated charged particle creates an oscillating electric and magnetic field (EM wave).

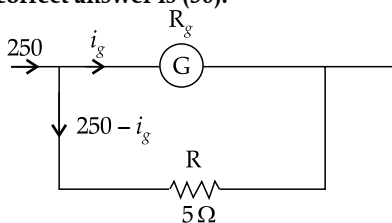
20. Option (1) is correct.

$$\text{Apparent depth} = \frac{\text{Actual depth}}{n}$$

$$= \frac{d \left( \frac{1}{n_1} + \frac{1}{n_2} \right)}{2} = \frac{d(n_1 + n_2)}{2n_1n_2}$$

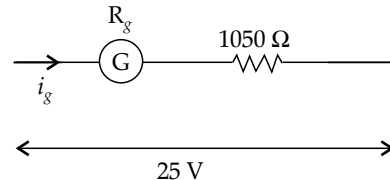
### Section B

21. The correct answer is (50).



Let  $R_g$  be the resistance of the galvanometer from the figure above

$$R_g i_g = 5(250 - i_g) \Rightarrow i_g = \frac{1250}{5 + R_g} \text{ mA}$$



$$25 = i_g(R_g + 1050)$$

$$25 = \left( \frac{1250}{5 + R_g} \right) (R_g + 1050) \times 10^{-3}$$

$$125 + 25R_g = [1250R_g + 1250 \times 1050] \times 10^{-3}$$

$$= 1.25R_g + 1250 \times 1.05$$

$$= 1.25R_g + 1312.50$$

$$23.75R_g = 1187.50$$

$$R_g = \frac{1187.50}{23.75} = 50 \Omega$$

22. The correct answer is (2).

According to Bohr's theory,

$$r_n \propto \frac{n^2}{Z} \Rightarrow \frac{r_2}{r_1} = \frac{n_2^2}{n_1^2} \times \frac{Z_1}{Z_2} = \frac{(4)^2}{(2)^2} \times \frac{2}{4}$$

Since  $Z_1 = Z_{\text{He}} = 2 \Rightarrow Z_2 = Z_{\text{Be}} = 4 \Rightarrow \frac{r_2}{r_1} = 2$

23. The correct answer is (4).

Angular momentum,

$$|\vec{L}| = I\omega = \frac{2}{5}MR^2 \left( \frac{v}{R} \right) = \frac{2}{5}MvR$$

$$\text{Total energy} = \frac{1}{2}Mv^2 \left( 1 + \frac{k^2}{R^2} \right)$$

$$\frac{k^2}{R^2} = \frac{2}{5} \text{ (for the solid sphere)}$$

$$E = \frac{1}{2}Mv^2 \left( 1 + \frac{2}{5} \right) = \frac{7}{10}Mv^2$$

$$\frac{|\vec{L}|}{E} = \frac{\frac{2}{5}MvR}{\frac{7}{10}Mv^2} = \frac{4}{7} \left( \frac{R}{v} \right) = \frac{\pi}{22}$$

$$w = \frac{v}{R} = \frac{4}{7} \times \frac{22}{\pi} = 4$$

24. The correct answer is (3).

Let  $x$  = actual height of the bird

$y$  = actual depth of the fish

$h_1$  = height of bird wrt fish

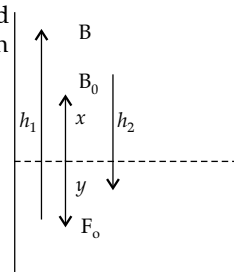
$h_2$  = depth of fish wrt bird

$$h_1 = y + \mu x$$

$$\frac{dh_1}{dt} = \frac{dy}{dt} + \mu \frac{dx}{dt}$$

$$v_{BF} = v_F + \mu v_B$$

$$12 = 8 + \frac{4}{3}v_B \Rightarrow v_B = 3 \text{ m s}^{-1}$$



25. The correct answer is (40).

$$\text{Elastic potential energy} = \frac{1}{2} \times Y (\text{Strain})^2 Al$$

$$\text{Strain} = \frac{\Delta l}{l} = \frac{0.02}{20} = 10^{-3}$$

$$80 = \frac{1}{2} \times 2 \times 10^{11} \times 10^{-6} \times A \times 20$$

$$A = 4 \times 10^{-5} \text{ m}^2 = 4 \times 10^{-5} \times 10^6 \text{ mm}^2 = 40 \text{ mm}^2$$

26. The correct answer is (3).

$$\text{Power gain } A_p = \beta^2 \frac{R_C}{R_B}$$

$$\beta = \text{Current gain} = \frac{I_C}{I_B} = \frac{50 \text{ mA}}{500 \mu\text{A}} = \frac{50000}{500} = 100$$

$$A_p = 10^4 \times \frac{1}{10} = 10^3 = 10^x$$

On comparing,  $x = 3$

27. The correct answer is (25).

$$U = \frac{1}{2} Li^2$$

$$i = i_0(1 - e^{-t/\tau}) \text{ for an R-L circuit}$$

$$\text{where, } i_0 = \frac{E}{R} = \text{steady state current}$$

$$J = \frac{L}{R} = \text{time constant}$$

$$\therefore U = \frac{1}{2} Li_0^2(1 - e^{-t/\tau})^2 = U_0(1 - e^{-t/\tau})^2$$

$$\text{where, } U_0 = \frac{1}{2} Li_0^2 = \text{steady state energy}$$

$$\text{Rate, } r = \frac{dU}{dt} = \frac{2U_0}{\tau}(1 - e^{-t/\tau})$$

$$r = \frac{2U_0}{\tau}(e^{-t/\tau} - e^{-2t/\tau}) \quad \dots(i)$$

For maximum rate ( $r_{max}$ ),

$$\frac{dr}{dt} = 0$$

$$\frac{dr}{dt} = \frac{2U_0}{\tau} \left[ -\frac{1}{\tau} e^{-t/\tau} + \frac{2}{\tau} e^{-2t/\tau} = 0 \right]$$

$$\frac{e^{-t/\tau}}{\tau} [-1 + 2e^{-t/\tau}] = 0$$

$\rightarrow e^{-t/\tau}$  which is possible only at  $t \rightarrow \infty$

$$\text{Hence } -1 + 2e^{-t/\tau} = 0$$

$$\rightarrow e^{-t/\tau} = \frac{1}{2} \text{ from (i), } r_{max} = \frac{2U_0}{\tau} \left( \frac{1}{2} - \frac{1}{4} \right) = \frac{U_0}{2\tau}$$

$$r_{max} = \frac{\frac{1}{2} Li_0^2}{2\tau} = \frac{1}{4} Ri_0^2 = \frac{1}{4} \times 25 \times \left( \frac{E}{25} \right)^2$$

$$= \frac{E^2}{100} = \frac{E^a}{2^b}$$

Comparing we get

$$a = 2 \Rightarrow b = 50$$

$$\frac{b}{a} = \frac{50}{2} = 25$$

28. The correct answer is (16).

$$P_1 = \frac{V_0^2}{R}$$

When the wire is cut into two equal halves, each has

$$\text{a resistance} = \frac{R}{2} \Rightarrow P_2 = \frac{V_0^2}{\frac{R}{2}} + \frac{V_0^2}{\frac{R}{2}} = \frac{4V_0^2}{R} = 4P_1$$

$$\frac{P_2}{P_1} = \frac{4}{1} = \frac{\sqrt{x}}{1}$$

On comparing,  $x = 16$

29. The correct answer is (4).

$$y = A \cos 30^\circ \text{ at any instant}$$

$$\text{Given } A = 40 \text{ cm} = 0.4 \text{ m}$$

$$\text{KE} = 200 = \frac{1}{2} m \left[ \omega \sqrt{A^2 - y^2} \right]^2 = \frac{1}{2} K(A^2 - y^2)$$

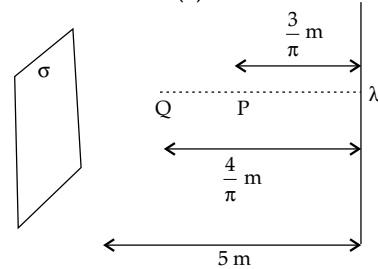
$$y = 0.4 \times \frac{\sqrt{3}}{2} = 0.2\sqrt{3} \text{ where, } k = m\omega^2$$

$$k = \frac{400}{A^2 - y^2} = \frac{400}{0.16 - 0.12} = \frac{400}{0.04}$$

$$= 10^4 \text{ N m} = 1 \times 10^x$$

On comparing,  $x = 4$

30. The correct answer is (6).



$$E_P = \frac{\sigma}{2\epsilon_0} - \frac{\lambda}{2\pi\epsilon_0 \left( \frac{3}{\pi} \right)} = \frac{\sigma}{2\epsilon_0} - \frac{\lambda}{6\epsilon_0}$$

Given  $|\lambda| = 2|\sigma|$

$$E_P = \frac{\sigma}{2\epsilon_0} - \frac{2\sigma}{6\epsilon_0} = \frac{\sigma}{6\epsilon_0}$$

$$E_Q = \frac{\sigma}{2\epsilon_0} - \frac{\lambda}{2\pi\epsilon_0 \left( \frac{4}{\pi} \right)} = \frac{\sigma}{2\epsilon_0} - \frac{\lambda}{8\epsilon_0}$$

Putting  $|\lambda| = 2|\sigma|$

$$E_Q = \frac{\sigma}{2\epsilon_0} - \frac{2\sigma}{8\epsilon_0} = \frac{\sigma}{4\epsilon_0}$$

$$\frac{E_P}{E_Q} = \frac{\sigma}{6\epsilon_0} \times \frac{4\epsilon_0}{\sigma} = \frac{2}{3} = \frac{4}{a}$$

On comparing,  $a = 6$