

ICSE Solved Paper 2018

PHYSICS

Class-X

(Maximum Marks : 80)

(Time allowed : Two hours)

(Candidates are allowed additional 15 minutes for only reading the paper. They must NOT start writing during this time.)

Answers to this paper must be written on the paper provided separately.

You will not be allowed to write during the first 15 minutes.

This time is to be spent in reading the Question Paper.

The time given at the head of this Paper is the time allowed for writing the answers.

Section I is compulsory. Attempt any four questions from Section II.

The intended marks for questions or parts of questions are given in brackets [].

SECTION-I

40 Marks

Attempt all questions from this Section.

1.(a) (i) State and define the S.I. unit of power.

(ii) How is the unit horse power related to the S.I. unit of power? [2]

Ans. (i) The rate at which work is done by a force is called the power i.e, $P = \frac{W}{t}$

The S.I. unit of power is watt (W),

1 Watt is defined as 1 Joule/second

(ii) Another unit of power is horse power (H.P)

1 horse power = 746 Watt

(b) State the energy changes in the following cases while in use: [2]

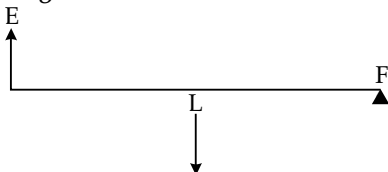
(i) An electric iron.

(ii) A ceiling fan.

Ans. (i) In electric iron, the electrical energy changes into heat energy.

(ii) In ceiling fan, the electrical energy changes into mechanical energy of rotation.

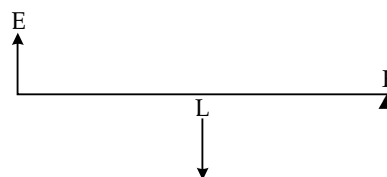
(c) The diagram below shows a lever in use: [2]



(i) To which class of lever does it belong?

(ii) Without changing the dimensions of the lever, if the load is shifted towards the fulcrum what happens to the mechanical advantage of the lever?

Ans. (i) Lever shown in figure is Class 2 lever as Load L is in between Effort E and Fulcrum F.



(ii) If load is shifted towards fulcrum, Then mechanical advantage increases as mechanical advantage is defined as the ratio of effort Arm to Load Arm i.e.,

$$\text{Mechanical advantage} = \frac{\text{Effort Arm}}{\text{Load Arm}} = \frac{\text{Load}}{\text{Effort}}$$

(d) (i) Why is the ratio of the velocities of light of wavelengths 4000\AA and 8000\AA in Vacuum 1:1?

(ii) Which of the above wave lengths has a higher frequency? [2]

Ans. (i) Ratio of velocity of light $\lambda = 4000\text{\AA}$ & 8000\AA in vacuum is in ratio of 1:1, because velocity does not depend on λ .

(ii) Since, we have $v = f\lambda \Rightarrow f = \frac{v}{\lambda}$
 \Rightarrow Smaller λ have higher frequency
 $\Rightarrow \lambda = 4000\text{\AA}$ have higher frequency

(e) (i) Why is the motion of a body moving with a constant speed around a circular path said to be accelerated?

(ii) Name the unit of physical quantity obtained by the formula $\frac{2k}{v^2}$.

Where, K: Kinetic energy, V: Linear velocity. [2]

Ans. (i) Motion around the circular path is said to be accelerated because there is an acceleration in

motion as velocity changes in direction with constant speed.

(ii) If $K \rightarrow$ kinetic energy, $v \rightarrow$ Linear Velocity then

$$\text{unit of } \frac{2K}{v^2} = \frac{2 \cdot \frac{1}{2} m v^2}{v^2} = m(\text{mass}) \text{ i.e., obtained}$$

physical quantity in mass has SI unit in Kg

2. (a) The power of a lens is $-5D$ [2]

(i) Find its focal length.

(ii) Name the type of lens.

Ans. (a) Given Power $P = -5D$

(i) Focal length $F = \frac{1}{p} = -\frac{1}{5} \text{ metre} = -20 \text{ cm}$

(ii) Since, power is $-ve$, the lens is diverging lens.

(b) State the position of the object in front of a converging lens if: [2]

(i) It produces a real and same size image of the object.

(ii) It is used as a magnifying lens.

Ans. (i) When object is placed at $2f$, then converging lens produce real and same size image

(ii) When object is placed in between f & O of lens then converging lens is used as magnifying lens.

(c) (i) State the relation between the critical angle and the absolute refractive index of a medium. [2]

(ii) Which colour of light has a higher critical angle? Red light or Green light.

Ans. (i) If critical angle is i_c and refractive index is μ then

from law of refraction $\frac{n}{1} \mu \sin i_c = 1 \cdot \sin 90^\circ$

$$\Rightarrow \mu = \frac{1}{\sin i_c}$$

(\therefore for Total internal reflection $r = 90^\circ$)

(ii) Since, the velocity of light for red is more than green. So, refractive index of red will be smaller (as $\mu \propto \frac{1}{v}$).

Again critical angle for green will be smaller

than red because $\sin i_c = \frac{1}{\mu}$ ie, $\mu_R < \mu_g \Rightarrow i_R > i_{cg}$.

Hence, critical angle for red light will be greater than green light.

(d) (i) Define scattering. [2]

(ii) The smoke from a fire looks white.

Which of the following statements is true?

1. Molecules of the smoke are bigger than the wavelength of light.

2. Molecules of the smoke are smaller than the wavelength of light.

Ans. (i) **Scattering:** The phenomenon of bending of light at the corners of small object and apparatus is called scattering. It is determined by Rayleigh's law of scattering, defined by

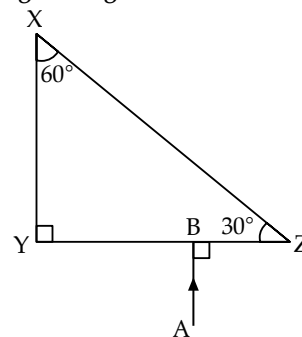
$$I_\lambda \propto \frac{1}{\lambda^4} \text{ where size of obstacle / aperture is}$$

$$a \ll \lambda$$

(ii) Smoke from fire looks white due to scattering from smoke molecules therefore for scattering molecule of smoke are bigger than λ of light, so option (1) is true.

(e) The following diagram shows a $60^\circ, 30^\circ, 90^\circ$ glass prism of critical angle 42° . [2]

Copy the diagram and complete the path of incident ray AB emerging out of the prism marking the angle of incidence on each surface.



Ans. Since, critical angle of prism

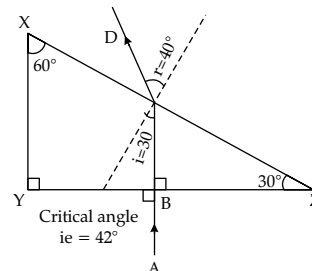
$i_c = 42^\circ$, for given ray AB the incidence angle is 30° , therefore ray AB is incident on surface YZ at an angle of incidence of 30° and refracted out from the prism

$$\left(\because \mu = \frac{1}{\sin i_c} \right). \text{ The angle of refraction is given by}$$

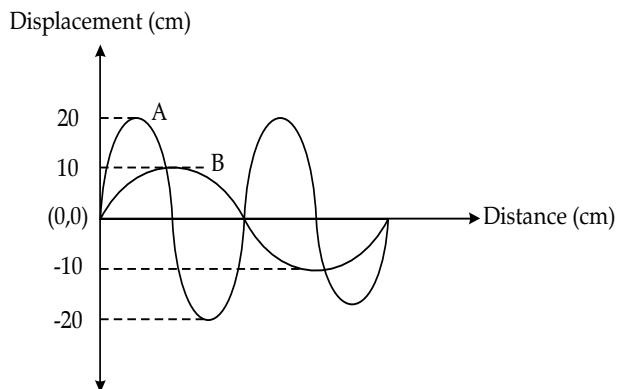
$$\mu \sin i = 1 \cdot \sin r \Rightarrow \sin r = \frac{\mu \sin i}{1}$$

$$= \frac{\sin 30^\circ}{\sin 42^\circ} = \frac{0.5}{0.669} = 0.75$$

$$\Rightarrow r = 40^\circ$$



3. (a) Displacement distance graph of two sound waves A and B, travelling in a medium, are shown in the diagram below. [2]



Study the two sound waves and compare their :

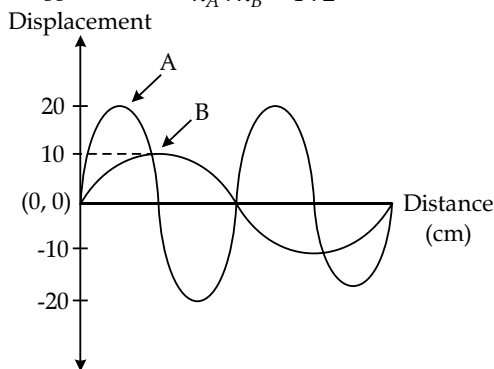
- (i) Amplitudes
- (ii) Wavelengths

Ans. (i) Amplitude of Sound A is larger than Sound B because Amplitude of $A = 20 \text{ cm} >$ Amplitude of $B = 10 \text{ cm}$

(ii) Wavelength of Sound A and B is given by $\lambda_B = 2\lambda_A$

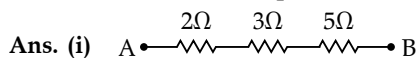
$$\Rightarrow \lambda_A = \frac{\lambda_B}{2}$$

so $\lambda_A : \lambda_B = 1 : 2$



(b) You have three resistors of values 2Ω , 3Ω and 5Ω . How will you join them so that the total resistance is more than 7Ω ? [2]

- (i) Draw a diagram for the arrangement.
- (ii) Calculate the equivalent resistance.

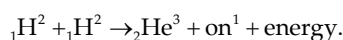


(ii) $R_{\text{equivalent}} = R_1 + R_2 + R_3 = 2 + 3 + 5 = 10 \Omega$

(c) (i) What do you understand by the term nuclear fusion? [2]

(ii) Nuclear power plants use nuclear fission reaction to produce electricity. What is the advantage of producing electricity by fusion reaction?

Ans. (i) **Nuclear fusion** : When two or more smaller nuclei produce the bigger nuclei by releasing large amount of energy, the process is called Nuclear fusion. e.g.,



(ii) Advantages on producing electricity by Nuclear fusion are:

- (1) No toxic waste are produced.
- (2) No radioactive radiation produced.
- (3) Nuclear fusion power plant can be located near the populated areas.
- (4) We produce large amount of energy by consuming simple Hydrogen gas.

(d) (i) What do you understand by free vibrations of body? [2]

(ii) Why does the amplitude of a vibrating body continuously decrease during damped vibrations?

Ans. (i) When a body is vibrating freely with constant amplitude of oscillation is called free vibration of a body.

(ii) When there is a damping force acting on vibrating body, then amplitude of vibration decreases due to damping force such vibration is called damped vibration.

(e) (i) How is the e.m.f. across primary and secondary coils of a transformer related with the number of turns of coil in them? [2]

(ii) On which type of current do transformers work?

Ans. (i) If N_p and N_s are number of turns in primary and secondary coil of transformer and E_p and E_s are the emf in primary and secondary coils than we have

$$\frac{E_p}{E_s} = \frac{N_p}{N_s}$$

(ii) We use alternating current A.C. in Transformers.

4.(a) (i) How can a temperature in degree Celsius be converted into S.I. unit of temperature? [2]

(ii) A liquid X has the maximum specific heat capacity and is used as a coolant in Car radiators. Name the liquid X.

Ans. (i) The S.I. unit of Temperature is K. We convert $^{\circ}\text{C}$ to K by adding 273.

$$\rightarrow K = ^{\circ}\text{C} + 273$$

(ii) The liquid X is water used as coolant in car.

(b) A solid metal weighing 150 g melts at its melting point of 800°C by providing heat at the rate of 100 W. The time taken for it to completely melt at the same temperature is 4 min. What is the specific latent heat of fusion of the metal? [2]

Ans. Given $m = 150 \text{ g} = 0.15 \text{ kg}$, Heat Rate $R = 100 \text{ W}$
time $t = 4 \text{ min} = 4 \times 60 \text{ s} = 240 \text{ s}$.

Let L is the latent heat of metal, we know that

$$mL = P \cdot \Delta t$$

$$\rightarrow L = \frac{P \cdot \Delta t}{m} = \frac{100 \times 4 \times 60}{0.15} = 1.6 \times 10^5 \text{ J/kg}$$

(c) Identify the following wires used in a household circuit: [2]

(i) The wire is also called as the phase wire.

(ii) The wire is connected to the top terminal of a three pin socket.

- Ans. (i) Red wire is used as phase wire
 (ii) Green earth wire is connected to top of three pin plug.
- (d) (i) What are isobars? [2]
 (ii) Give one example of isobars.

Ans. (i) **Isobar** : The atoms which have same mass number A but different atomic number Z is called Isobars.
 (ii) Example of Isobar
 ${}^6\text{C}^{14}$ & ${}^7\text{N}^{14}$
 ${}^{18}\text{Ar}^{40}$ and ${}^{20}\text{Ca}^{40}$

(e) State any two advantages of electromagnets over permanent magnets. [2]

- Ans. Two advantages of electromagnet over permanent magnets are :
- (i) Electromagnet can be easily ON and OFF
 - (ii) Magnetic field B can be controlled by controlling the current flowing in electromagnet.
 - (iii) These can be used in medical science.

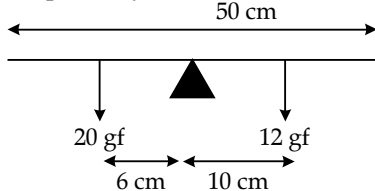
SECTION-II **40 Marks**

Attempt any four questions from this Section.

- 5.(a) (i) Derive a relationship between S.I. and C.G.S. unit of work. [3]
 (ii) A force acts on body and displaces it by a distances S in a direction at an angle θ with the direction of force. What should be the to get the value of θ to get the maximum positive work?

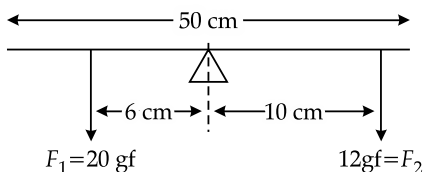
Ans. (i) Work done = force \times displacement
 The S.I. unit of work is Joule or Newton \times meter and CGS unit of work is erg or dyne \times cm.
 $\rightarrow 1 \text{ joule} = 1 \text{ N} \times 1 \text{ m} = 10^5 \text{ dyne} \times 10^2 \text{ cm} = 10^7 \text{ ergs}.$
 (ii) We know work done $W = FS \cos \theta$
 To get maximum the work done, θ is 0 (zero)
 \rightarrow angle b/w force and displacement θ is zero.

- (b) A half metre rod is pivoted at the centre with two weights of 20 gf and 12 gf suspended at a perpendicular distance of 6 cm and 10 cm from the pivot respectively as shown below. [3]



- (i) Which of the two forces acting on the rigid rod causes clockwise moment?
- (ii) Is the rod in equilibrium?
- (iii) The direction of 20 kgf force is reversed. What is the magnitude of the resultant moment of the forces on the rod?

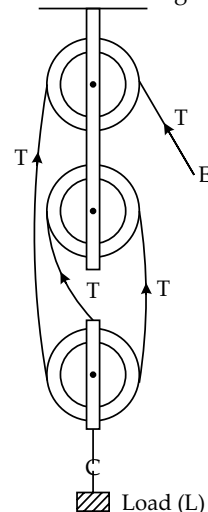
Ans. (i) 12gf force produce clockwise 50 cm motion.



- (ii) Moment of $F_1 = 20 \text{ gf} \times 6 \text{ cm}$
 $F_1 = 20 \text{ gf}$
 $= 120 \text{ gf cm}.$
 Moment of $F_2 = 12 \text{ gf} \times 10 \text{ cm} = 120 \text{ gfcm}$
 Since, moment of $F_1 =$ moment of F_2
 \rightarrow rod is in equilibrium
- (iii) If direction of 20gf is reverse, the resultant moment of force on rod is
 $T = 120 \text{ gfcm} + 120 \text{ gf cm} = 240 \text{ gfcm}.$

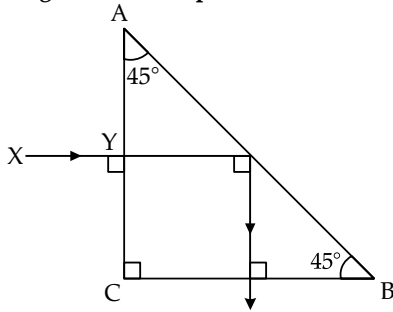
- (c) (i) Draw a diagram to show a block and tackle pulley system having a velocity ratio of 3 marking the direction of load (L), effort (E) and tension (T). [4]
 (ii) The pulley system drawn lifts a load of 150 N when an effort of 60 N is applied. Find its mechanical advantage.
 (iii) Is the above pulley system an ideal machine or not?

Ans. (i) Pulley system diagram is shown in figure. Labelled tension T, load L and effort E.
 (ii) The mechanical advantage of pulley system is given by load/effort
 Given load $L = 150 \text{ N}$, Effort $E = 60 \text{ N}$
 \rightarrow Mechanical Advantage = $L/E = 150/60 = 2.5$



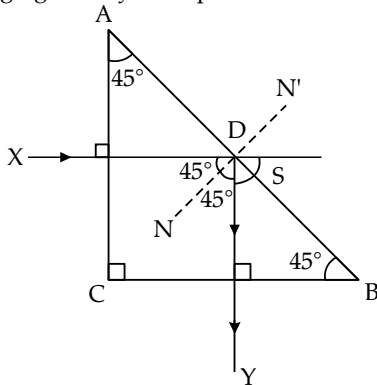
- (iii) The above pulley system is not an ideal machine because there must be some friction.

6. (a) A ray of light XY passes through a right angled isosceles prisms as shown below. [3]



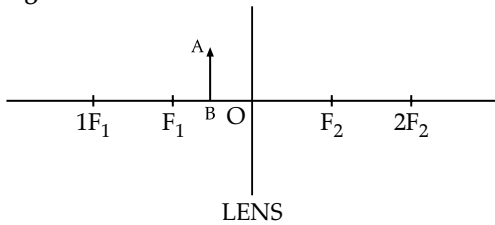
- (i) What is the angle through which the incident ray deviates and emerges out of the prism?
- (ii) Name the instrument where this action of prism is put into use.
- (iii) Which prism surface will behave as a mirror?

Ans. (i) The angle of deviation between incident and emerging out ray from prism is $S = 90^\circ$



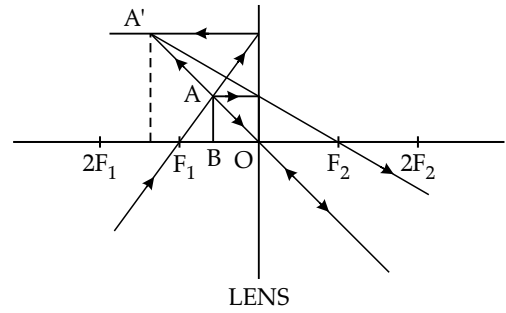
- (ii) This action of prism is used as a perfect reflector and the instrument is called the periscope.
- (iii) The Prism Surface AB act is mirror.

(b) An object AB is placed between O and F_1 on the principal axis of a converging lens as shown in the diagram. [3]



Copy the diagram and by using three standard rays starting from point A, obtain an image of the object AB.

Ans. (i) Fig. shows the ray diagram using three rays started from point. A, we get the image $A'B'$



(c) An object is placed at a distance of 12 cm from a convex lens of focal length 8 cm. Find: [4]

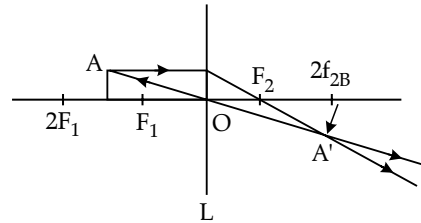
- (i) the position of the image.
- (ii) nature of the image

Ans. Given object distance $u = -12$ cm, Focal length $f = 8$ cm.

We know lense formula $\frac{1}{f} = \frac{1}{v} - \frac{1}{u}$

or, $\frac{1}{v} = \frac{1}{f} + \frac{1}{u} = \frac{1}{8} - \frac{1}{12} = \frac{3-2}{24} = \frac{1}{24}$

or, $v = +24$ cm

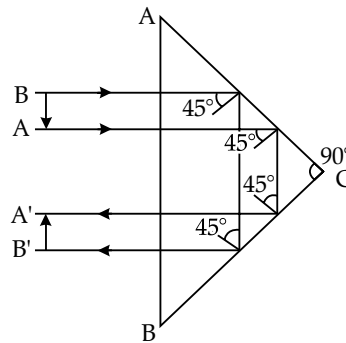


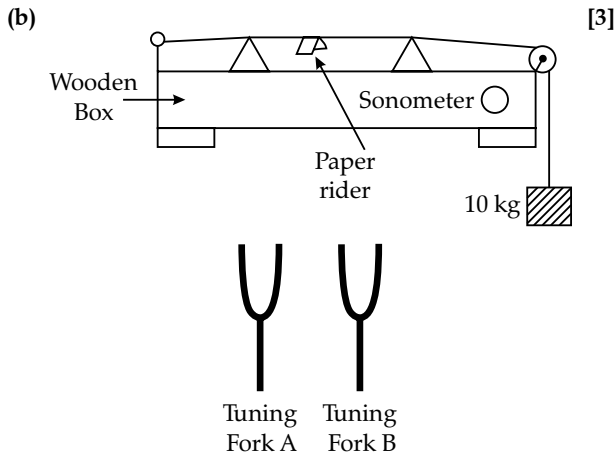
(i) Position of image $V = +24$ cm., Right side of lense

(ii) Nature of image is Real, inverted and magnified.

7. (a) Draw the diagram of a right angled isosceles prism which is used to make an inverted erect image. [3]

Ans. Diagram is shown in figure for inverted erect image by Right angle isosceles prism.

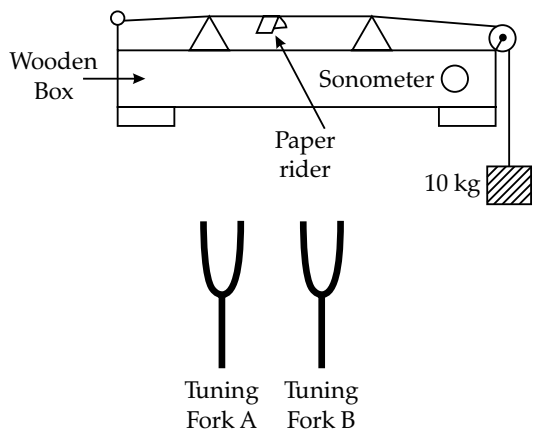




The diagram above shows a wire stretched over a sonometer. Stems of two vibrating tuning forks A and B are touched to the wooden box of the sonometer. It is observed that the paper rider (a small piece of paper folded at the centre) present on the wire flies off when the stem of vibrating tuning fork B is touched to the wooden box.

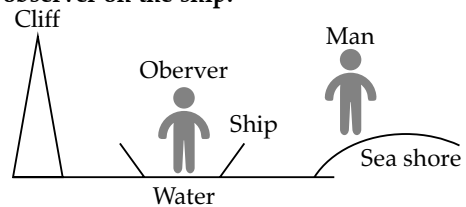
- (i) Name the phenomenon when the paper rider just vibrates.
- (ii) Name the phenomenon when the paper rider flies off.
- (iii) Why does the paper rider fly off when the stem of tuning fork B is touched to the box?

- Ans. (i) When paper just vibrates on the wire of sonometer then phenomenon is called 1st overtone or 2nd harmonics.
- (ii) When paper flies off, then we have fundamental mode or first harmonics.
- (iii) Paper flies off by Tuning Fork B, because it produces fundamental mode or first harmonics in wire.

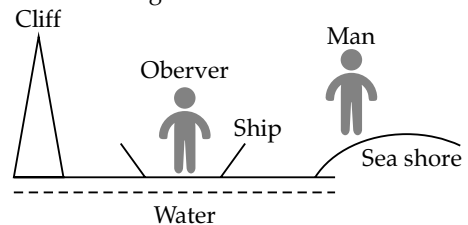


- (c) A person is standing at the sea shore. An observer on the ship which is anchored in between a vertical cliff and the person on the shore fires a gun. The person on the shore hears two sounds, 2 seconds and 3 seconds after seeing the smoke of the fired gun. If the speed of sound in the air is 320 ms^{-1} then calculate: [4]

- (i) The distance between the observer on the ship and the person on the shore.
- (ii) The distance between the cliff and the observer on the ship.



- Ans. Given $V = 320 \text{ ms}^{-1}$
 Sea Shore man listens two sounds in $t_1 = 2 \text{ sec}$ and $t_2 = 3 \text{ sec}$ after seeing smoke.



- (i) Since, sea shore man listens one sound in 2 Sec which comes back from observer, so distance between observer and man on shore is $\frac{320 \times 2}{2} \text{ m}$,
- (ii) Since, Sea Shore man listens other sound in 3 seconds by reflecting from cliff. So, distance b/w cliff and sea shore man is

$$d_1 = 320 \text{ m}$$

$$d_2 = \frac{320 \times 3}{2}$$

Thus the distance b/w cliff and observer on ship is $d = d_2 - d_1 = 480 - 320 = 160 \text{ m}$

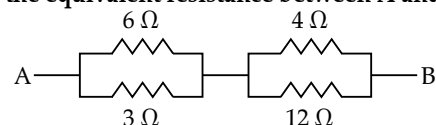
8. (a) (i) A fuse is rated 8 A. Can it be used with an electrical appliance rated 5 KW, 200 V? Give a reason. [3]
- (ii) Name two safety devices which are connected to the live wire of household electric circuit.

- Ans. (i) For given appliance $P = 5 \text{ KW}$, $V = 200 \text{ V}$
 $\Rightarrow I = \frac{P}{V} = \frac{5 \times 1000}{200} = 25 \text{ A}$

Since, given fuse is rated $I_{\text{fuse}} = 8 \text{ A}$ which is less than 25 A, thus we can not use this fuse in given appliance.

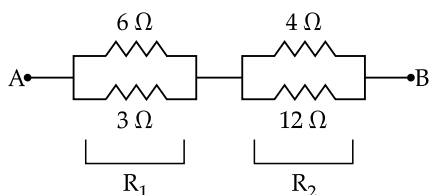
- (ii) Two safety devices used in live wire are :
 (1) Switches (2) Fuse

- (b) (i) Find the equivalent resistance between A and B.



- (ii) State whether the resistivity of a wire changes with the change in the thickness of the wire.

Ans. (i)



$$R_{eq} = R_1 + R_2$$

$$\text{again } R_1 = \frac{6 \times 3}{6 + 3} = \frac{18}{9} = 2\Omega$$

$$R_2 = \frac{4 \times 12}{4 + 12} = \frac{48}{16} = 3\Omega$$

$$R_{AB} = R_{eq} = R_1 + R_2 = 2\Omega + 3\Omega = 5\Omega$$

(ii) Resistivity ρ does not change with thickness of wire, since it is independent of dimension of wire but it depends on material only.

(c) An electric iron is rated 220V, 2KW. [4]

(i) If the iron is used for 2h daily find the cost of running it for one week if it costs ₹4.25 per kWh.

(ii) Why is the fuse absolutely necessary in a power circuit?

Ans. (i) Given electric iron rated 220 V, 2 KW daily uses 2 hr, Cost = ₹ 4.25 / kWh

$$\begin{aligned} \Rightarrow \text{Cost of power used by Iron for one week} \\ = 7 \text{ day} \times 2 \text{ hr} \times 2 \text{ kW} \times ₹ 4.25 / \text{KWhr.} \\ = ₹ 28 \times 4.25 = ₹ 119.00 \end{aligned}$$

(ii) Fuse is necessary in electrical circuit because if there is a flow of high current or voltage in the circuit, then fuse is blown off by melting and as a result the power circuit is OFF and our appliances are safe and they are protected.

9.(a) (i) Heat supplied to a solid changes it into liquid. What is this change in phase called? [3]

(ii) During the phase change does the average kinetic energy of the molecules of the substance increase?

(iii) What is the energy absorbed during the phase change called?

Ans. (i) When solid changed into liquid by supply heat, this change in phase is called melting.

(ii) During this phase change K.E. of molecules of substance increases.

(iii) The energy observed during this phase change is called latent heat of solid.

(b) (i) State two differences between "Heat Capacity" and "Specific Heat Capacity". [3]

(ii) Give a mathematical relation between Heat Capacity and Specific Heat Capacity.

Ans. (i) Difference between heat capacity and specific heat capacity

$$(1) \text{ Heat capacity } c = \frac{Q}{\Delta T},$$

$$\text{Specific heat capacity } s = \frac{Q}{m\Delta T}$$

(2) Unit of heat capacity is $J/^\circ C$ while of specific heat capacity is $J/kg^\circ C$

$$(ii) \text{ Since, heat capacity } c = \frac{Q}{\Delta T},$$

$$\text{Sp. Heat Capacity } s = \frac{Q}{m\Delta T}$$

$$\Rightarrow \text{Specific heat capacity } s = \frac{Q}{m\Delta T} = \frac{1}{m}$$

(heat capacity)

\Rightarrow heat capacity = mass \times specific heat capacity

(c) The temperature of 170g of water $50^\circ C$ is lowered to $5^\circ C$ by adding certain amount of ice to it. Find the mass of ice added. [4]

Given :

Specific heat capacity of water = $4200 \text{ kg}^{-1} \text{ }^\circ C^{-1}$
and Specific latent heat of ice = 336000 J kg^{-1}

Ans. Given mass of water = 170 g = 0.17 kg

$$T_1 = 50^\circ C, T_2 = 5^\circ C,$$

specific heat capacity of water = $4200 \text{ J kg}^{-1} \text{ }^\circ C^{-1}$

Sp. Latent heat of ice = 336000 J kg^{-1}

Let mass of ice added be x then we have heat lost by water = Heat used by ice.

$$\Rightarrow \text{water at } 50^\circ C \text{ to } 5^\circ C = \text{ice at } ^\circ C \text{ to water at } ^\circ C + \text{water at } 0^\circ C \text{ to } 5^\circ C$$

$$\Rightarrow 0.17 \times 4200 \times (50 - 5)$$

$$= x \times 336000 + x \times 4200 \times 5 = 32130$$

$$= 357000x$$

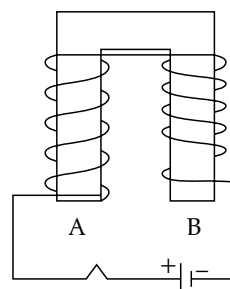
$$\text{or, } x = \frac{32130}{357000}$$

$$= 0.09 \text{ Kg}$$

$$x = 90 \text{ g}$$

\Rightarrow we should add 90 g of ice to water.

10.(a)



[3]

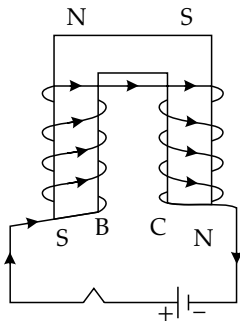
The diagram shows a coil wound around a U shape soft iron bar AB.

(i) What is the polarity induced at the ends A and B when the switch is pressed?

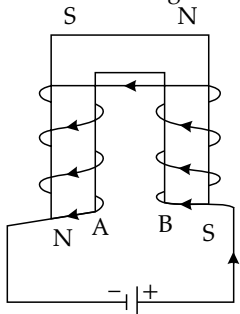
(ii) Suggest one way to strengthen the magnetic field in the electromagnet.

(iii) What will be the polarities at A and B if the direction of current is reversed in the circuit?

Ans. (i) Fig. shows U shaped soft iron bar AB when switch is pressed, current flows in coils and soft iron becomes electromagnet, From Right hand thumb rule, the polarity of A and B be South Pole (S)



(ii) To strengthen the \vec{B} in electromagnet, we use the cross wire in bar A and B or by increasing the current in coils. Fig. Shows coils.



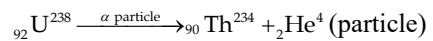
(iii) If direction of current is reverse in arrangement (i) the ends A and B will act as North Pole (N).

(b) The ore of Uranium found in nature contains $^{92}\text{U}_{238}$ and $^{92}\text{U}_{235}$. Although both the Isotopes are fissionable, it is found out experimentally that one of the two isotopes is more easily fissionable. [3]

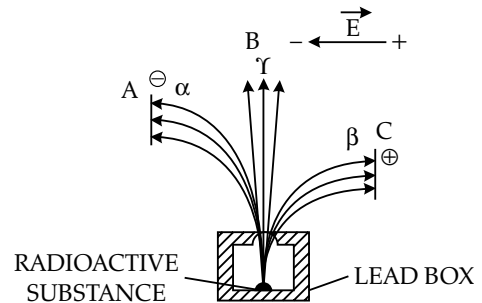
- (i) Name the isotope of Uranium which is easily fissionable.
- (ii) Give a reason for your answer.
- (iii) Write a nuclear reaction when Uranium 238 emits an alpha particle to form a Thorium (Th) nucleus.

Ans. (i) The isotope $^{92}\text{U}_{235}$ is more easily fissionable.
 (ii) Because this nuclei $^{92}\text{U}_{235}$ is fissioned by thermal neutrons and converted to $^{92}\text{U}_{236}$
 Example $^{92}\text{U}_{235} + {}^0_1\text{n}^1 \rightarrow ^{92}\text{U}_{236} \rightarrow ^{56}\text{Ba}^{144} + ^{36}\text{Kr}^{89} + 3{}_0^1\text{n}^1 + 200 \text{ MeV}$. Breaks up to Ba and Kr and neutron and release large amount of energy.

(iii) Nuclear reaction of $^{92}\text{U}_{238}$ emits α particle as

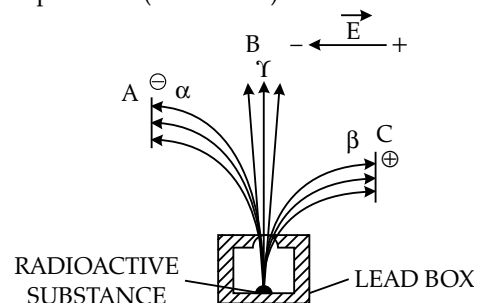


(c) Radiations given out from a source when subjected to an electric field in a direction perpendicular to their path are shown below in the diagram. The arrows show the path of the radiation A, B and C. Answer the following questions in terms of A, B and C. [4]



- (i) Name the radiation B which is unaffected by the electric field.
- (ii) Why does the radiation C deflect more than A?
- (iii) Which among the three causes the least biological damage externally?
- (iv) Name the radiation which is used in carbon dating.

Ans. (i) Radiation B is γ - Ray, which is undeflected in electric field.
 (ii) The Radiation C is deflected more than A because they have light mass (β particle) then the particle A (He nucleus)



- (iii) A particle causes least biological damage because they are loosely penetrating particle.
- (iv) β particle or radiation is used in carbon dating.

□□□

Don't Stop Reading !
 You never know what might be asked in the exam.

To download Chapter-wise Mind Maps scan the code below

To download Chapter-wise Revision Notes scan the code below